



**THIRD SPACE  
LEARNING**

# Number Sense Worksheet

Number and Quantity

**Grades 1 to 3**

## Questions

Name: .....

Date: .....

1 How many tens and ones are in the number 45?

Answer

---



2 Break down the number 72 into tens and ones.

Answer

---



3 What is the value of the digit 6 in the number 63?

Answer

---



4 How many tens are in the number 89?

Answer

---



5 Write the number 54 as tens and ones.

Answer

---



## Number Sense Worksheet | Grades 1 to 3

6 How many tens are in 354?

Answer

7 How many ones are in 217?

Answer

8 How many tens are equal to 6 hundreds?

Answer

9 How many hundreds are equal to 20 tens?

Answer

10 Solve  $34 + 45$ .

Answer

## Number Sense Worksheet | Grades 1 to 3

**11** Subtract 28 from 65.

Answer

---

**12** Solve  $56 + 19$ .

Answer

---

**13** Subtract 13 from 20.

Answer

---

**14** Which ten is 76 closer to, 70 or 80?

Answer

---

**15** Which ten is 42 closer to, 40 or 50?

Answer

---

## Number Sense Worksheet | Grades 1 to 3

16 Which ten is 85 closer to, 80 or 90?

Answer

17 Solve  $345 + 289$ .

Answer

18 Subtract 156 from 400.

Answer

19 Subtract 250 from 700.

Answer

20 Add  $678 + 321$ .

Answer

# Answers

Question number	Question	Answers	Standard
1	How many tens and ones are in the number 45?	4 tens and 5 ones	1.NBT.B.2
2	Break down the number 72 into tens and ones.	7 tens and 2 ones	1.NBT.B.2
3	What is the value of the digit 6 in the number 63?	6 tens (or 60)	1.NBT.B.2
4	How many tens are in the number 89?	8 tens	1.NBT.B.2
5	Write the number 54 as tens and ones.	5 tens and 4 ones	1.NBT.B.2
6	How many tens are in 354?	35 tens	2.NBT.A.1
7	How many ones are in 217?	217 ones	2.NBT.A.1
8	How many tens are equal to 6 hundreds?	60 tens	2.NBT.A.1
9	How many hundreds are equal to 20 tens?	2 hundreds	2.NBT.A.1
10	Solve $34 + 45$ .	79	2.NBT.B.5
11	Subtract 28 from 65.	37	2.NBT.B.5
12	Solve $56 + 19$ .	75	2.NBT.B.5
13	Subtract 13 from 20.	7	2.NBT.B.5
14	Which ten is 76 closer to, 70 or 80?	80	3.NBT.A.1

## Number Sense Worksheet | Grades 1 to 3 | Answers




Question number	Question	Answers	Standard
15	Which ten is 42 closer to, 40 or 50?	40	3.NBT.A.1
16	Which ten is 85 closer to, 80 or 90?	90	3.NBT.A.1
17	Solve $345 + 289$ .	634	3.NBT.A.2
18	Subtract 156 from 400.	244	3.NBT.A.2
19	Subtract 250 from 700.	450	3.NBT.A.2
20	Add $678 + 321$ .	999	3.NBT.A.2

## Do you have a group of students who need a boost in math?

Each student could receive a personalized lesson every week from our specialist one-on-one math tutors.

- ✓ Differentiated instruction for each student
- ✓ Aligned to your state's standard
- ✓ Scaffolded learning to close gaps

## Speak to us

-  [thirdspacelearning.com/us/](https://thirdspacelearning.com/us/)
-  (929) 298-4593
-  [hello@thirdspacelearning.com](mailto:hello@thirdspacelearning.com)



**THIRD SPACE**  
LEARNING