



**THIRD SPACE  
LEARNING**

# Mean Worksheet

Statistics and Probability

**Grades 6 to 8**

## Skill Questions

Name: .....

Date: .....

- 1 Find the mean of the data set:  
15 16 17 18 19

Answer

- 2 Find the mean of the data set:  
20 25 26 28 31

Answer

- 3 Find the mean of the data set:  
36 38 37 40 35

Answer

- 4 Find the mean of the data set:  
25 28 29 30 33

Answer

- 5 Find the mean of the data set:  
39 40 41 42 43

Answer

## Mean Worksheet | Grades 6 to 8

- 6 Find the mean of the data set:  
22 23 20 24 22

Answer

- 7 Find the mean of the data set:  
57 59 61 66 68 72  
Round to the nearest hundredth.

Answer

- 8 Find the mean of the data set:  
101 102 105 107 110 114

Answer

- 9 Find the mean of the data set:  
110 112 118 122 122 125  
Round to the nearest hundredth.

Answer

- 10 Find the mean of the data set:  
67 88 110 145 156 188  
Round to the nearest hundredth.

Answer

## Applied Questions

- 11 The mean of 4 values is 12.  
Here are 3 of the values:  
10 12 14  
Find the 4<sup>th</sup> value.

Answer

- 12 The mean of 4 values is 23.  
Here are 3 of the values:  
20 22 26  
Find the 4<sup>th</sup> value.

Answer

- 13 The mean of 4 values is 37.  
Here are 3 of the values:  
36 38 39  
Find the 4<sup>th</sup> value.

Answer

- 14** The mean of 4 values is 66.  
Here are 3 of the values:  
64 65 67  
Find the 4<sup>th</sup> value.

Answer

- 15** The mean of 4 values is 104.  
Here are 3 of the values:  
99 105 109  
Find the 4<sup>th</sup> value.

Answer

## Answers

Question number	Question	Answers	Standard
1	Find the mean of the data set: 15 16 17 18 19	The mean is 17	6.SP.B.5c
2	Find the mean of the data set: 20 25 26 28 31	The mean is 26	6.SP.B.5c
3	Find the mean of the data set: 36 38 37 40 35	The mean is 37.2	6.SP.B.5c
4	Find the mean of the data set: 25 28 29 30 33	The mean is 29	6.SP.B.5c
5	Find the mean of the data set: 39 40 41 42 43	The mean is 41	6.SP.B.5c
6	Find the mean of the data set: 22 23 20 24 22	The mean is 22.2	6.SP.B.5c
7	Find the mean of the data set: 57 59 61 66 68 72 Round to the nearest hundredth.	The mean is 63.83	6.SP.B.5c
8	Find the mean of the data set: 101 102 105 107 110 114	The mean is 106.5	6.SP.B.5c
9	Find the mean of the data set: 110 112 118 122 122 125 Round to the nearest hundredth.	The mean is 118.17	6.SP.B.5c
10	Find the mean of the data set: 67 88 110 145 156 188 Round to the nearest hundredth.	The mean is 125.67	6.SP.B.5c

## Mean Worksheet | Grades 6 to 8 | Answers




Question number	Question	Answers	Standard
11	The mean of 4 values is 12. Here are 3 of the values: 10 12 14 Find the 4 <sup>th</sup> value.	The 4th value is 12.	6.SP.B.5c
12	The mean of 4 values is 23. Here are 3 of the values: 20 22 26 Find the 4 <sup>th</sup> value.	The 4th value is 24.	6.SP.B.5c
13	The mean of 4 values is 37. Here are 3 of the values: 36 38 39 Find the 4 <sup>th</sup> value.	The 4th value is 35.	6.SP.B.5c
14	The mean of 4 values is 66. Here are 3 of the values: 64 65 67 Find the 4 <sup>th</sup> value.	The 4th value is 68.	6.SP.B.5c
15	The mean of 4 values is 104. Here are 3 of the values: 99 105 109 Find the 4 <sup>th</sup> value.	The 4th value is 103.	6.SP.B.5c

## Do you have a group of students who need a boost in math?

Each student could receive a personalized lesson every week from our specialist one-on-one math tutors.

- ✓ Differentiated instruction for each student
- ✓ Aligned to your state's standard
- ✓ Scaffolded learning to close gaps

## Speak to us

-  [thirdspacelearning.com/us/](https://thirdspacelearning.com/us/)
-  (929) 298-4593
-  [hello@thirdspacelearning.com](mailto:hello@thirdspacelearning.com)



**THIRD SPACE**  
LEARNING