



**THIRD SPACE
LEARNING**

Decimal To Fraction Worksheet

Ratio and Proportion


Grades 4 to 5

Questions

Name:

Date:


1



Write 0.56 as a fraction.

Answer

2




Write 0.8 as a fraction.

Answer


Decimal To Fraction Worksheet | Grades 4 to 5

- 3 Show 0.25 in the model. Then write it as a fraction.





Answer

- 4 Show 0.7 in the model. Then write it as a fraction.



Answer

5



Write 1.48 as a mixed number.

Answer

Decimal To Fraction Worksheet | Grades 4 to 5

6 Complete the equation:

$$0.6 = \frac{\quad}{10} = \frac{\quad}{100}$$

Answer

7 Complete the equation:

$$0.4 = \frac{\quad}{10} = \frac{\quad}{100}$$

Answer

8 Complete the equation:

$$1.1 = 1\frac{\quad}{10} = 1\frac{\quad}{100}$$

Answer

9 Convert 0.45 to a fraction.

Answer

10 Convert 0.3 to a fraction.

Answer

Decimal To Fraction Worksheet | Grades 4 to 5

11 Convert 0.08 to a fraction.

Answer

12 Convert 0.32 to a fraction.

Answer

13 Convert 1.56 to a mixed number.

Answer

14 Convert 0.387 to a fraction.

Answer

15 Change 0.005 to a fraction.

Answer

Decimal To Fraction Worksheet | Grades 4 to 5

16 Convert 1.3 to a mixed number.

Answer

17 Convert 2.04 to a mixed number.

Answer

18 Convert 3.125 to a mixed number.

Answer







19 Convert 0.504 to a fraction.

Answer

20 Write 4.075 as a mixed number.

Answer

Answers

Question number	Question	Answers	Standard
1	 <p>Write 0.56 as a fraction.</p>	$\frac{56}{100}$ or $\frac{14}{25}$	4.NF.C.5
2	 <p>Write 0.8 as a fraction.</p>	$\frac{8}{10}$ or $\frac{4}{5}$	4.NF.C.5
3	<p>Show 0.25 in the model. Then write it as a fraction.</p> 	 <p>Fraction: $\frac{25}{100}$ or $\frac{1}{4}$</p>	4.NF.C.5
4	<p>Show 0.7 in the model. Then write it as a fraction.</p> 	 <p>Fraction: $\frac{7}{10}$ or $\frac{70}{100}$</p>	4.NF.C.5

Decimal To Fraction Worksheet | Grades 4 to 5 | Answers

Question number	Question	Answers	Standard
5	Write 1.48 as a mixed number.	$1\frac{48}{100}$ or $1\frac{12}{25}$	5.NBT.A.3
6	Complete the equation: $0.6 = \frac{\quad}{10} = \frac{\quad}{100}$	$0.6 = \frac{6}{10} = \frac{60}{100}$	4.NF.C.5
7	Complete the equation: $0.4 = \frac{\quad}{10} = \frac{\quad}{100}$	$0.4 = \frac{4}{10} = \frac{40}{100}$	4.NF.C.5
8	Complete the equation: $1.1 = 1\frac{\quad}{10} = 1\frac{\quad}{100}$	$1.1 = 1\frac{1}{10} = 1\frac{10}{100}$	5.NBT.A.3
9	Convert 0.45 to a fraction.	$\frac{45}{100}$ or $\frac{9}{20}$	4.NF.C.5
10	Convert 0.3 to a fraction.	$\frac{3}{10}$ or $\frac{30}{100}$	4.NF.C.5
11	Convert 0.08 to a fraction.	$\frac{8}{100}$ or $\frac{2}{25}$	4.NF.C.5
12	Convert 0.32 to a fraction.	$\frac{32}{100}$ or $\frac{8}{25}$	4.NF.C.5
13	Convert 1.56 to a mixed number.	$1\frac{56}{100}$ or $1\frac{14}{25}$	5.NBT.A.3
14	Convert 0.387 to a fraction.	$\frac{387}{1,000}$	5.NBT.A.3
15	Change 0.005 to a fraction.	$\frac{5}{1,000}$ or $\frac{1}{200}$	5.NBT.A.3
16	Convert 1.3 to a mixed number.	$1\frac{3}{10}$	5.NBT.A.3
17	Convert 2.04 to a mixed number.	$2\frac{4}{100}$ or $2\frac{1}{25}$	5.NBT.A.3
18	Convert 3.125 to a mixed number.	$3\frac{125}{1,000}$ or $3\frac{1}{8}$	5.NBT.A.3
19	Convert 0.504 to a fraction.	$\frac{504}{1,000}$ or $\frac{63}{125}$	5.NBT.A.3
20	Write 4.075 as a mixed number.	$4\frac{75}{1,000}$ or $4\frac{3}{40}$	5.NBT.A.3

Do you have a group of students who need a boost in math?

Each student could receive a personalized lesson every week from our specialist one-on-one math tutors.

- ✓ Differentiated instruction for each student
- ✓ Aligned to your state's standard
- ✓ Scaffolded learning to close gaps

Speak to us

- 🖥️ thirdspacelearning.com/us/
- 📞 (929) 298-4593
- ✉️ hello@thirdspacelearning.com



THIRD SPACE
LEARNING