



**THIRD SPACE
LEARNING**

Cylinder Worksheet

Geometry

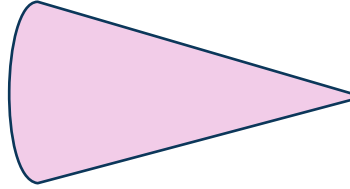
Grades 1 to 3

Questions

Name:

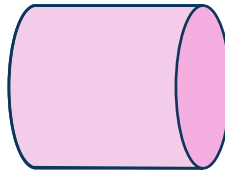
Date:

1 Is this shape a cylinder?




Answer

2 Is this shape a cylinder?



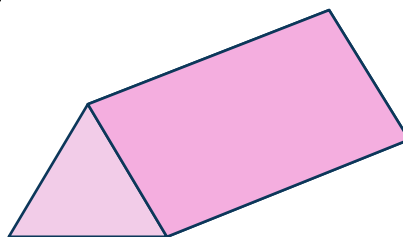
Answer

3 Is this object a cylinder?



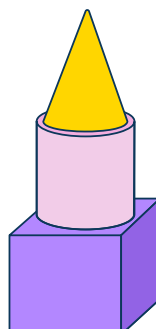
Answer

4 Is this shape a cylinder?



Answer

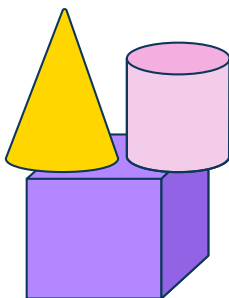
5 Look at the composite shape. What color is the cylinder?



Answer

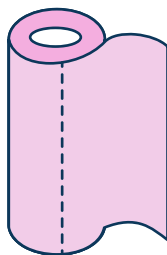
Cylinder Worksheet | Grades 1 to 3

6 How many cylinders are in this composite shape?



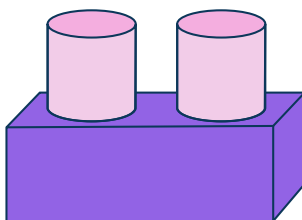
Answer

7 Is this object a cylinder?



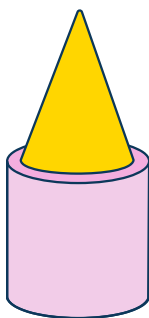
Answer

8 How many cylinders are in this composite shape?



Answer

9 Look at the composite shape. Which part is the cylinder?



Answer

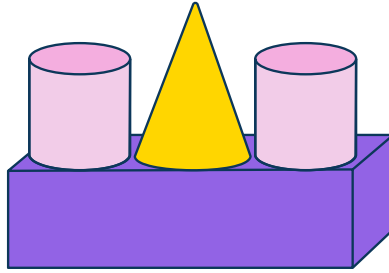
10 Is this shape a cylinder?



Answer


Cylinder Worksheet | Grades 1 to 3

- 11 How many cylinders are in this composite shape?



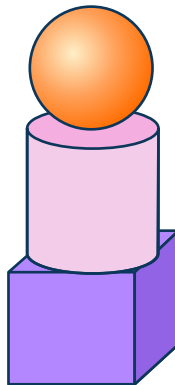
Answer

- 12 Is this object a cylinder?



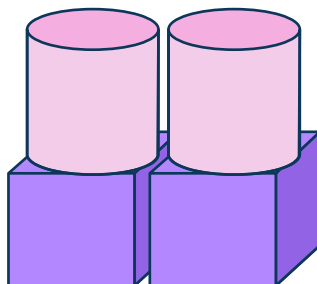
Answer

- 13 Look at the composite shape. What color is the cylinder?



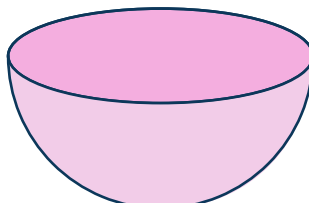
Answer

- 14 How many cylinders are in this composite shape?



Answer

- 15 Is this shape a cylinder?



Answer

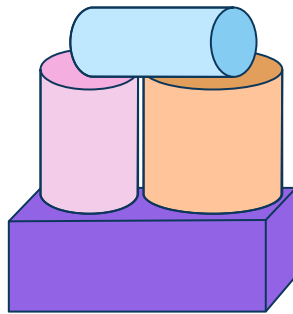
Cylinder Worksheet | Grades 1 to 3

16 Is this object a cylinder?



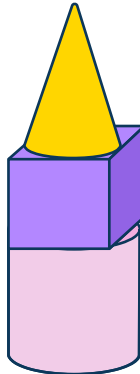
Answer

17 How many cylinders are in this composite shape?



Answer

18 Look at the composite shape. Which part is the cylinder?



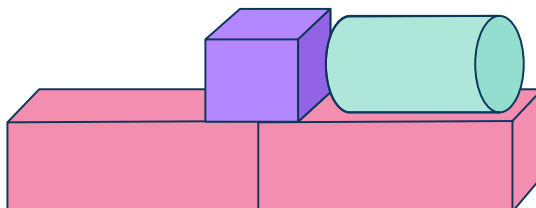
Answer

19 Is this object a cylinder?



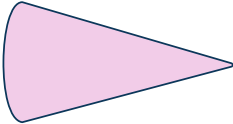
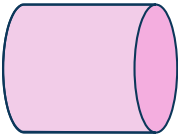

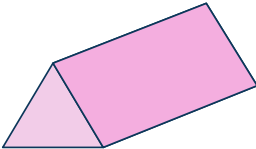
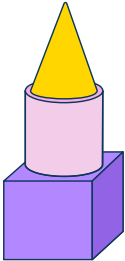
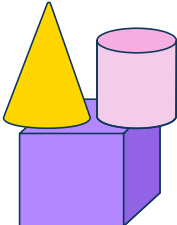
Answer

20 How many cylinders are in this composite shape?

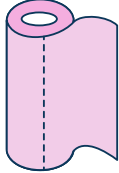
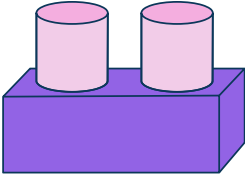
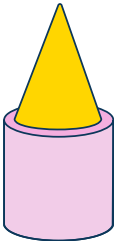
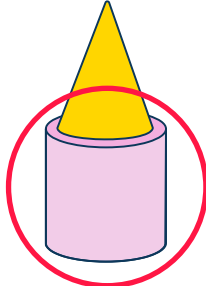

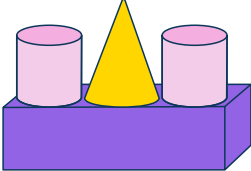



Answer

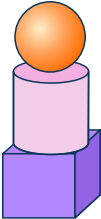
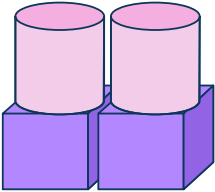
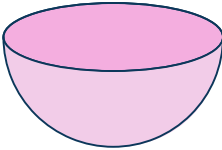

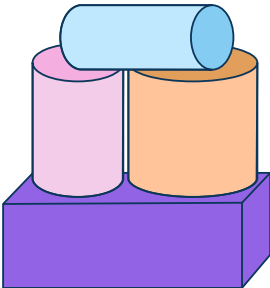
Answers

Question number	Question	Answers	Standard
1	Is this shape a cylinder? 	No	1.G.2
2	Is this shape a cylinder? 	Yes	1.G.2
3	Is this object a cylinder? 	Yes	1.G.2
4	Is this shape a cylinder? 	No	1.G.2
5	Look at the composite shape. What color is the cylinder? 	Pink	1.G.2
6	How many cylinders are in this composite shape? 	1	1.G.2

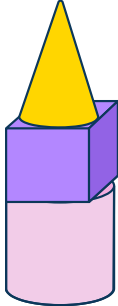
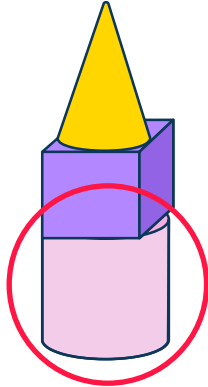

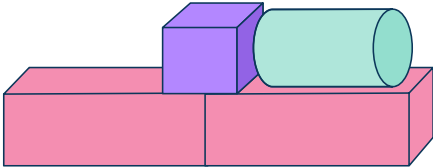
Cylinder Worksheet | Grades 1 to 3 | Answers

Question number	Question	Answers	Standard
7	Is this object a cylinder? 	Yes	1.G.2
8	How many cylinders are in this composite shape? 	2	1.G.2
9	Look at the composite shape. Which part is the cylinder? 	Bottom 	1.G.2
10	Is this shape a cylinder? 	No	1.G.2
11	How many cylinders are in this composite shape? 	2	1.G.2
12	Is this object a cylinder? 	Yes	1.G.2

Cylinder Worksheet | Grades 1 to 3 | Answers

Question number	Question	Answers	Standard
13	<p>Look at the composite shape. What color is the cylinder?</p> 	Pink	1.G.2
14	<p>How many cylinders are in this composite shape?</p> 	2	1.G.2
15	<p>Is this shape a cylinder?</p> 	No	1.G.2
16	<p>Is this object a cylinder?</p> 	No	1.G.2
17	<p>How many cylinders are in this composite shape?</p> 	3	1.G.2

Cylinder Worksheet | Grades 1 to 3 | Answers




Question number	Question	Answers	Standard
18	<p>Look at the composite shape. Which part is the cylinder?</p> 		1.G.2
19	<p>Is this object a cylinder?</p> 	Yes	1.G.2
20	<p>How many cylinders are in this composite shape?</p> 	1	1.G.2

Do you have a group of students who need a boost in math?

Each student could receive a personalized lesson every week from our specialist one-on-one math tutors.

- ✓ Differentiated instruction for each student
- ✓ Aligned to your state's standard
- ✓ Scaffolded learning to close gaps

Speak to us

-  thirdspacelearning.com/us/
-  (929) 298-4593
-  hello@thirdspacelearning.com



THIRD SPACE
LEARNING