



**THIRD SPACE
LEARNING**

Skip Counting Worksheet

Number and Quantity

Grades 1 to 3

Questions

Name:

Date:

- 1 Count by tens, starting from 10. Write the next five numbers.

Answer



- 2 Count by ones, starting from 1. Write the next five numbers.

Answer



- 3 Count by tens, starting from 20. Write the next five numbers.

Answer



- 4 Count by tens, starting from 30. Write the next five numbers.

Answer



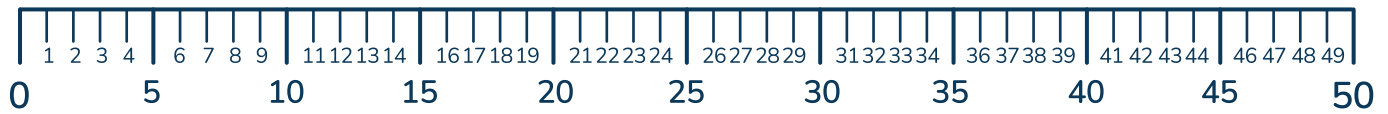
- 5 Count by ones, starting from 3. Write the next five numbers.

Answer



Skip Counting Worksheet | Grades 1 to 3

- 6 Skip count by 5s, starting from 0 on a number line. Write the next five numbers.



Answer

- 7 Skip count by 10s, starting from 0 on a number line. Write the next five numbers.



Answer

- 8 Skip count backwards by 100s, starting from 500. Write the next five numbers.

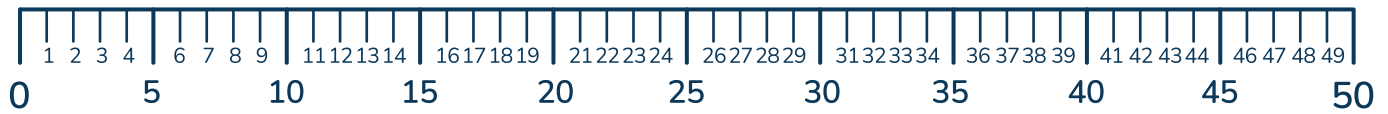
Answer

- 9 Skip count by 2s, starting from 1. Stop at 21.

Answer

Skip Counting Worksheet | Grades 1 to 3

- 10** Skip count by 5s on a number line, starting from 25. Write the next five numbers.



Answer

- 11** Skip count by 100s, starting from 0. Write the next five numbers.

Answer

- 12** Skip count backwards by 5s, starting from 30. Write the next five numbers.

Answer

- 13** Skip count by 100s, starting from 200. Write the next five numbers.

Answer

- 14** Skip count by 5s starting from 40. Write the next five numbers.

Answer

Skip Counting Worksheet | Grades 1 to 3

- 15** Skip count backwards by 10s starting from 120. Write the next five numbers.

Answer



- 16** Skip count by 100s starting from 300. Write the next five numbers.

Answer



- 17** Skip count backwards by 10s, starting from 100. Write the next five numbers.

Answer



- 18** Skip count by 2s, starting from 23. Stop at 35.

Answer



- 19** Skip count backwards by 5s starting from 50. Write the next five numbers.

Answer





Skip Counting Worksheet | Grades 1 to 3

- 20** Skip count backwards by 100s, starting from 900. Write the next five numbers.


Answer



Answers

Question number	Question	Answers	Standard
1	Count by tens, starting from 10. Write the next five numbers.	20, 30, 40, 50, 60	K.CC.1
2	Count by ones, starting from 1. Write the next five numbers.	2, 3, 4, 5, 6	K.CC.1
3	Count by tens, starting from 20. Write the next five numbers.	30, 40, 50, 60, 70	K.CC.1
4	Count by tens, starting from 30. Write the next five numbers.	40, 50, 60, 70, 80	K.CC.1
5	Count by ones, starting from 1. Write the next five numbers.	2, 3, 4, 5, 6	K.CC.1
6	Skip count by 5s, starting from 0 on a number line. Write the next five numbers. 	5, 10, 15, 20, 25	2.NBT.2
7	Skip count by 10s, starting from 0 on a number line. Write the next five numbers. 	10, 20, 30, 40, 50	2.NBT.2
8	Skip count backwards by 100s, starting from 500. Write the next five numbers.	400, 300, 200, 100, 0	2.NBT.2
9	Skip count by 2s, starting from 1. Stop at 21.	1, 3, 5, 7, 9, 11, 13, 15, 17, 19, 21	2.NBT.2

Skip Counting Worksheet | Grades 1 to 3 | Answers

Question number	Question	Answers	Standard
10	<p>Skip count by 5s on a number line, starting from 25. Write the next five numbers.</p> 	30, 35, 40, 45, 50	2.NBT.2
11	Skip count by 100s, starting from 0. Write the next five numbers.	100, 200, 300, 400, 500	2.NBT.2
12	Skip count backwards by 5s, starting from 30. Write the next five numbers.	25, 20, 15, 10, 5	Standard included
13	Skip count by 100s, starting from 200. Write the next five numbers.	300, 400, 500, 600, 700	2.NBT.2
14	Skip count by 5s starting from 40. Write the next five numbers.	45, 50, 55, 60, 65	2.NBT.2
15	Skip count backwards by 10s starting from 120. Write the next five numbers.	110, 100, 90, 80, 70	2.NBT.2
16	Skip count by 100s starting from 300. Write the next five numbers.	400, 500, 600, 700, 800	2.NBT.2
17	Skip count backwards by 10s, starting from 100. Write the next five numbers.	90, 80, 70, 60, 50	2.NBT.2
18	Skip count by 2s, starting from 23. Stop at 35.	23, 25, 27, 29, 31, 33, 35	2.NBT.2
19	Skip count backwards by 5s starting from 50. Write the next five numbers.	45, 40, 35, 30, 25	2.NBT.2

Skip Counting Worksheet | Grades 1 to 3 | Answers




Question number	Question	Answers	Standard
20	Skip count backwards by 100s, starting from 900. Write the next five numbers.	800, 700, 600, 500, 400	2.NBT.2

Do you have a group of students who need a boost in math?

Each student could receive a personalized lesson every week from our specialist one-on-one math tutors.

- ✓ Differentiated instruction for each student
- ✓ Aligned to your state's standard
- ✓ Scaffolded learning to close gaps

Speak to us

-  thirdspacelearning.com/us/
-  (929) 298-4593
-  hello@thirdspacelearning.com



THIRD SPACE
LEARNING