




THIRD SPACE
LEARNING

GCSE Exam Questions

Ratio to Fraction | Ratio &
Proportion

GCSE Exam Questions: Ratio to Fraction

- 1) (a) 8 cards are taken from a pack of cards. Write the ratio of chosen cards that have a value of less than 6 to the total number of cards chosen.

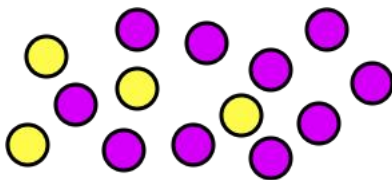


(1)

- (b) The ratio of picture cards to non-picture cards in a full deck of cards is 3:10.
What fraction of the deck are not picture cards?

(2)
(3 marks)

- 2) (a) Below is a diagram showing purple and yellow counters.



Harry says “the ratio of purple counters to the total number of counters is 5:2”.
Why must Harry be wrong?

(1)

- (b) Write 3 correct ratios using the diagram in part a).

(3)
(4 marks)

GCSE Exam Questions: Ratio to Fraction

- 3) (a) Half of the fish in a tank are rainbow fish.
20% are gouramis and the rest are corydoras.

Write the ratio of rainbow fish to gouramis to corydoras in the simplest form.

(4)

- (b) Originally there were 20 fish. Three more rainbow fish are added.
What fraction of the fish in the tank are now rainbow fish?

(2)
(6 marks)

- 4) (a) A bag contains red, blue and yellow counters. There are 26 counters.
11 of the counters are red. The ratio of blue to yellow counters is 3:2.

What fraction of the counters are yellow?

Give your answer in its simplest terms.

(5)


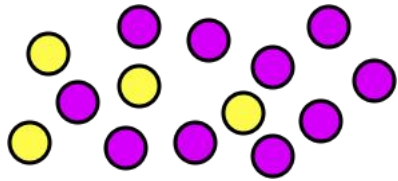
- (b) 2 more counters are added.

The new ratio of counters is 6:5:3.

What colour(s) are the two new counters?

(3)
(8 marks)

GCSE Exam Questions: Ratio to Fraction Answers

	Question	Answer	Marks
1) (a)	<p>8 cards are taken from a pack of cards. Write the ratio of chosen cards that have a value of less than 6 to the total number of cards chosen.</p> 	(a) 3:8	(1)
(b)	The ratio of picture cards to non-picture cards in a full deck of cards is 3:10. What fraction of the deck are not picture cards?	(b) $\frac{10}{10 + 3}$ $\frac{10}{13}$	(1) (1)
2) (a)	<p>Below is a diagram showing purple and yellow counters.</p>  <p>Harry says “the ratio of purple counters to the total number of counters is 5:2”. Why must Harry be wrong?</p>	(a) The total number of counters must be greater than or equal to the number of purple counters so the ratio is not correct.	(1)
(b)	Write 3 correct ratios using the diagram in part a).	(b) $Y:P = 4:10$ or $2:5$ $P:Total = 10:14$ or $5:7$ $Y:Total = 4:14$ or $2:7$	(1) (1) (1)
3) (a)	<p>Half of the fish in a tank are rainbow fish. 20% are gouramis and the rest are corydoras.</p> <p>Write the ratio of rainbow fish to gouramis to corydoras in the simplest form.</p>	(a) $\frac{1}{2} = 50\%$ $50\% + 20\% = 70\%$ $100\% - 70\% = 30\%$ $5:2:3$	(1) (1) (1) (1)
(b)	Originally there were 20 fish. Three more rainbow fish are added. What fraction of the fish in the tank are now rainbow fish?	(b) $20 \div 2 + 3 = 13$ $\frac{13}{23}$	(1) (1)

GCSE Exam Questions: Ratio to Fraction Answers

	Question	Answer	Marks
4) (a)	A bag contains red, blue and yellow counters. There are 26 counters. 11 of the counters are red. The ratio of blue to yellow counters is 3:2. What fraction of the counters are yellow? Give your answer in its simplest terms.	(a) $26 - 11 = 15$ $15 \div (3 + 2) = 3$ $2 \times 3 = 6$ $\frac{6}{26}$ $\frac{3}{13}$	(1) (1) (1) (1) (1)
(b)	2 more counters are added. The new ratio of counters is 6:5:2. What colour(s) are the two new counters?	(b) $28 \div (6 + 5 + 3) = 2$ $6:5:3 = 12:10:6$ Original 11:9:6 1 red, 1 blue	(1) (1) (1)

Where to go next?

For more diagnostic questions, and GCSE maths revision resources and worksheets to support students in fixing any misconceptions take a look at the free Third Space Learning [GCSE maths revision](#) pages.

Scan the QR code to discover our library of FREE GCSE maths revision resources

Do you have KS4 students who need additional support in maths?



Our specialist tutors will help students to develop the skills they need to succeed at GCSE in weekly one to one online revision lessons. Trusted by secondary schools across the UK.

Visit thirdspacelearning.com to find out more.