



THIRD SPACE
LEARNING

GCSE Exam Questions

Circle Graphs | Algebra

GCSE Exam Questions: Circle Graphs

- 1) What is the diameter of the circle $x^2 + y^2 = 36$?

Circle your answer.

6 12 18 72

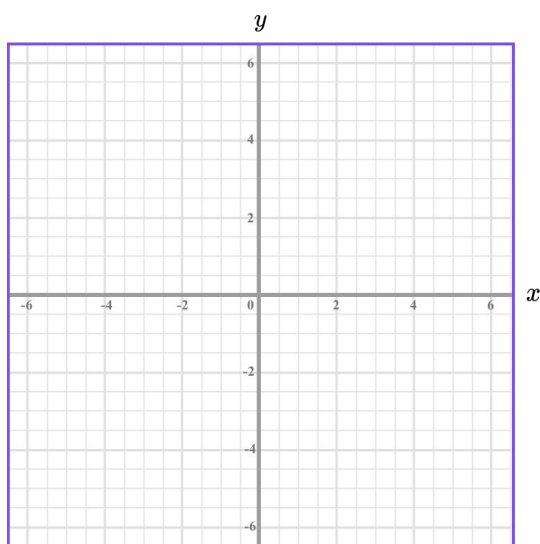
(1 mark)

- 2) A point P (10, - 5) lies on a circle $x^2 + y^2 = 125$.

Find the equation of the tangent to the circle at point P.

(3 marks)

- 3) (a) On the grid, draw the graph of $x^2 + y^2 = 25$.



(2)

- (b) Hence find estimates for the solutions of simultaneous equations:

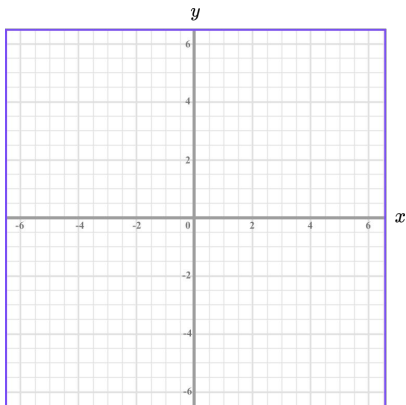
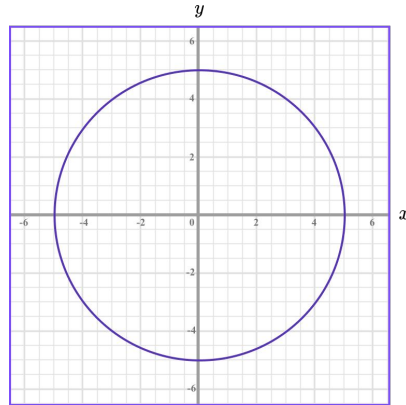
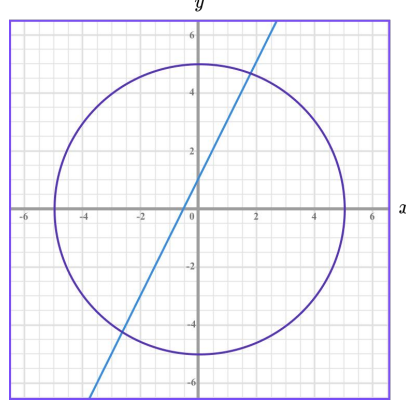
$$x^2 + y^2 = 25$$

$$y = 2x + 1$$

(3)

(5 marks)

GCSE Exam Questions: Circle Graphs Answers

	Question	Answer	Marks
1)	What is the diameter of the circle $x^2 + y^2 = 36$? Circle your answer. 6 12 18 72	Radius is $\sqrt{36} = 6$ Diameter = $2 \times 6 = 12$	(1)
2)	A point P (10, - 5) lies on a circle $x^2 + y^2 = 125$. Find the equation of the tangent to the circle at point P.	Gradient of OP (the radius) is $-\frac{1}{2}$ Gradient of the tangent is 2 $y = 2x - 25$	(1) (1) (1)
3) (a)	On the grid, draw the graph of $x^2 + y^2 = 25$. 	(a)  Circle with centre (0, 0) Radius = 5	(1) (1)
(b)	Hence find estimates for the solutions of simultaneous equations: $x^2 + y^2 = 25$ $y = 2x + 1$	(b)  $y = 2x + 1$ correctly drawn $x = 1.8$ and $y = 4.7$ $x = - 2.6$ and $y = - 4.3$	(1) (1) (1)

Where to go next?

For more diagnostic questions, and GCSE maths revision resources and worksheets to support students in fixing any misconceptions take a look at the free Third Space Learning [GCSE maths revision](#) pages.

Scan the QR code to discover our library of FREE GCSE maths revision resources

Do you have KS4 students who need additional support in maths?



Our specialist tutors will help students to develop the skills they need to succeed at GCSE in weekly one to one online revision lessons. Trusted by secondary schools across the UK.

Visit thirdspacelearning.com to find out more.