



**THIRD SPACE
LEARNING**

Greater Than Sign Worksheet

Algebra

Grades 1 to 3

Skill Questions

Name:

Date:

- 1 Write a number sentence to compare the following numbers using the greater than sign.

5 and 3

Answer

- 2 Write a number sentence to compare the following numbers using the greater than sign.

12 and 14

Answer

- 3 Write a number sentence to compare the following numbers using the greater than sign.

16 and 17

Answer

- 4 Write a number sentence to compare the following numbers using the greater than sign.

22 and 18

Answer

- 5 Write a number sentence to compare the following numbers using the greater than sign.

37 and 24

Answer

Greater Than Sign Worksheet | Grades 1 to 3

- 6 Write a number sentence to compare the following numbers using the greater than sign.

32 and 33

Answer

- 7 Write a number sentence to compare the following numbers using the greater than sign.

39 and 27

Answer

- 8 Write a number sentence to compare the following numbers using the greater than sign.

$\frac{1}{3}$ and $\frac{1}{2}$

Answer

- 9 Write a number sentence to compare the following numbers using the greater than sign.

$\frac{1}{3}$ and $\frac{1}{4}$

Answer

- 10 Write a number sentence to compare the following numbers using the greater than sign.

$\frac{1}{3}$ and $\frac{2}{3}$

Answer

Applied Questions

- 11** At the toy store, Jenny bought a toy for \$12, and Jake bought a toy for \$8. Who spent more money at the toy store?

Answer

- 12** In a board game, Player A rolled a two-digit number: 47. Player B rolled a two-digit number: 56. Whose roll is greater?

Answer

- 13** Sarah has 84 apples, and James has 67 apples. Who has more apples, Sarah or James?

Answer

Greater Than Sign Worksheet | Grades 1 to 3

- 14 Liam and Emma are baking cookies. Liam has $\frac{3}{4}$ cup of sugar, and Emma has $\frac{5}{8}$ cup of sugar. Who has more sugar, Liam or Emma?

Answer

- 15 At the school fair, there are two jars with colored marbles. Jar A has $\frac{2}{3}$ of its marbles red, and Jar B has $\frac{3}{5}$ of its marbles red. Which jar has a greater fraction of red marbles?

Answer

Answers

Question number	Question	Answers	Standard
1	Write a number sentence to compare the following numbers using the greater than sign. 5 and 3	$5 > 3$	1.NBT.B.3
2	Write a number sentence to compare the following numbers using the greater than sign. 12 and 14	$14 > 12$	1.NBT.B.3
3	Write a number sentence to compare the following numbers using the greater than sign. 16 and 17	$17 > 16$	1.NBT.B.3
4	Write a number sentence to compare the following numbers using the greater than sign. 22 and 18	$22 > 18$	2.NBT.A.4
5	Write a number sentence to compare the following numbers using the greater than sign. 37 and 24	$37 > 24$	2.NBT.A.4
6	Write a number sentence to compare the following numbers using the greater than sign. 32 and 33	$33 > 32$	2.NBT.A.4
7	Write a number sentence to compare the following numbers using the greater than sign. 39 and 27	$39 > 27$	2.NBT.A.4

Greater Than Sign Worksheet | Grades 1 to 3 | Answers

Question number	Question	Answers	Standard
8	Write a number sentence to compare the following numbers using the greater than sign. $\frac{1}{3}$ and $\frac{1}{2}$	$\frac{1}{2} > \frac{1}{3}$	3.NF.A.3d
9	Write a number sentence to compare the following numbers using the greater than sign. $\frac{1}{3}$ and $\frac{1}{4}$	$\frac{1}{3} > \frac{1}{4}$	3.NF.A.3d
10	Write a number sentence to compare the following numbers using the greater than sign. $\frac{1}{3}$ and $\frac{2}{3}$	$\frac{2}{3} > \frac{1}{3}$	3.NF.A.3d
11	At the toy store, Jenny bought a toy for \$12, and Jake bought a toy for \$8. Who spent more money at the toy store?	Jenny $\$12 > \8	1.NBT.B.3
12	In a board game, Player A rolled a two-digit number: 47. Player B rolled a two-digit number: 56. Whose roll is greater?	Player B $56 > 47$	2.NBT.A.4
13	Sarah has 84 apples, and James has 67 apples. Who has more apples, Sarah or James?	Sarah $84 > 67$	2.NBT.A.4
14	Liam and Emma are baking cookies. Liam has $\frac{3}{4}$ cup of sugar, and Emma has $\frac{5}{8}$ cup of sugar. Who has more sugar, Liam or Emma?	Liam $\frac{3}{4} > \frac{5}{8}$	3.NF.A.3d

Greater Than Sign Worksheet | Grades 1 to 3 | Answers




Question number	Question	Answers	Standard
15	At the school fair, there are two jars with colored marbles. Jar A has $\frac{2}{3}$ of its marbles red, and Jar B has $\frac{3}{5}$ of its marbles red. Which jar has a greater fraction of red marbles?	Jar A $\frac{2}{3} > \frac{3}{5}$	3.NF.A.3d

Do you have a group of students who need a boost in math?

Each student could receive a personalized lesson every week from our specialist one-on-one math tutors.

- ✓ Differentiated instruction for each student
- ✓ Aligned to your state's standard
- ✓ Scaffolded learning to close gaps

Speak to us

-  thirdspacelearning.com/us/
-  +1 929-298-4593
-  hello@thirdspacelearning.com



THIRD SPACE
LEARNING