



**THIRD SPACE
LEARNING**

Subtracting Decimals Worksheet

Number and Quantity
6.NS.B.3

Grades 6 to 8

Skill Questions

Name:

Date:

1 Subtract $9.8 - 2.7$

Answer

2 Subtract $9.8 - 4.9$

Answer

3 Subtract $9.06 - 1.08$

Answer

4 Subtract $9.57 - 4.98$

Answer

5 Subtract $3.16 - 0.87$

Answer

Subtracting Decimals Worksheet | Grades 6 to 8

6 Subtract $3.56 - 0.47$

Answer

7 Subtract $3.55 - 0.35$

Answer

8 Subtract $88.3 - 52.58$

Answer

9 Subtract $155.73 - 48.49$

Answer

10 Subtract $498 - 70.94$

Answer

Applied Questions

- 11 James buys four books. Each book costs \$11.89. He pays with a \$50 bill. How much change should James get?

Answer

- 12 The first four terms of an arithmetic sequence are 16.8, 16.1, 15.4, 14.7
Write the next two terms.

Answer

- 13 Find the missing number
 $578.02 - \underline{\hspace{2cm}} = 101.98$

Answer

Subtracting Decimals Worksheet | Grades 6 to 8

- 14** Kate spent \$19.45 on a book for school. The school store had a special sale where she received a 10% discount that amounted to \$1.95 off her purchase. How much did Kate pay after the 10% discount?

Answer

-
- 15** Laura goes shopping and buys items totaling \$17.36. She pays with a \$20 bill. How much change does she receive?

Answer

Answers

Question number	Question	Answers	Standard
1	Subtract $9.8 - 2.7$	7.1	6.NS.B.3
2	Subtract $9.8 - 4.9$	4.9	6.NS.B.3
3	Subtract $9.06 - 1.08$	7.98	6.NS.B.3
4	Subtract $9.57 - 4.98$	4.59	6.NS.B.3
5	Subtract $3.16 - 0.87$	2.29	6.NS.B.3
6	Subtract $3.56 - 0.47$	3.09	6.NS.B.3
7	Subtract $3.55 - 0.35$	3.2	6.NS.B.3
8	Subtract $88.3 - 52.58$	35.72	6.NS.B.3
9	Subtract $155.73 - 48.49$	107.24	6.NS.B.3
10	Subtract $498 - 70.94$	427.06	6.NS.B.3
11	James buys four books. Each book costs \$11.89. He pays with a \$50 bill. How much change should James get?	\$2.44	6.NS.B.3
12	The first four terms of an arithmetic sequence are 16.8, 16.1, 15.4, 14.7 Write the next two terms.	14, 13.3	6.NS.B.3
13	Find the missing number $578.02 - \text{_____} = 101.98$	476.04	6.NS.B.3

Subtracting Decimals Worksheet | Grades 6 to 8 | Answers




Question number	Question	Answers	Standard
14	Kate spent \$19.45 on a book for school. The school store had a special sale where she received a 10% discount that amounted to \$1.95 off her purchase. How much did Kate pay after the 10% discount?	\$17.50	6.NS.B.3
15	Laura goes shopping and buys items totaling \$17.36. She pays with a \$20 bill. How much change does she receive?	$\$20 - \$17.36 = \$2.64$	6.NS.B.3

Do you have a group of students who need a boost in math?

Each student could receive a personalized lesson every week from our specialist one-on-one math tutors.

- ✓ Differentiated instruction for each student
- ✓ Aligned to your state's standard
- ✓ Scaffolded learning to close gaps

Speak to us

-  thirdspacelearning.com/us/
-  +1 929-298-4593
-  hello@thirdspacelearning.com



THIRD SPACE
LEARNING