



**THIRD SPACE  
LEARNING**

# Multiples Worksheet

Number and Quantity

**Grades 4 to 5**

## Skill Questions

Name: .....

Date: .....

- 1 Write down the first three multiples of 4.

Answer

---

- 2 Write down the first three multiples of 2.

Answer

---

- 3 Write down the first three multiples of 5.

Answer

---

- 4 Write down the first four multiples of 7.

Answer

---

- 5 Write down the first four multiples of 9.

Answer

---

## Multiples Worksheet | Grades 4 to 5

6 Write down the first four multiples of 11.

Answer

7 Write down the first five multiples of 35.

Answer

8 Write down the first five multiples of 50.

Answer

9 Write down the first five multiples of 100.

Answer

10 Write down the first six multiples of 250.

Answer

## Applied Questions

- 11** Find the first even number that is a multiple of 3 and 7.

Answer

- 12** Find the smallest number over 200 that is a multiple of 7.

Answer

- 13** From the list of numbers 5, 9, 12, 14, 20, 23, 30, 36, 45

- a** Write down the multiples of 7

Answer

- b** Write down the multiples of 5

Answer

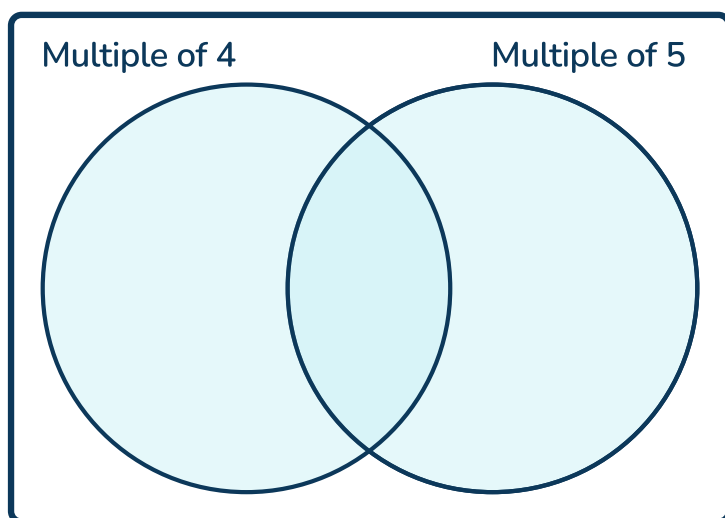
- c** Write down the multiples of 12

Answer

- 14 A grocery store has 7878 boxes of cereal. They want to put the same number of boxes on each shelf. How many boxes should they put on each shelf?

Answer

- 15 Place the following numbers into the Venn diagram:  
8, 10, 12, 16, 20, 21, 25, 40, 50

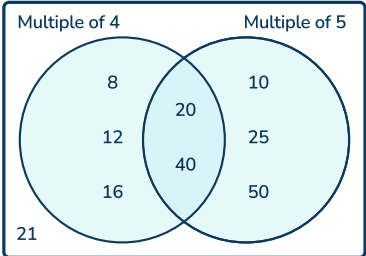


Answer

# Answers

Question number	Question	Answers	Standard
1	Write down the first three multiples of 4.	4, 8 and 12	4.OA.B.4
2	Write down the first three multiples of 2.	2, 4 and 6	4.OA.B.4
3	Write down the first three multiples of 5.	5, 10, and 15	4.OA.B.4
4	Write down the first four multiples of 7.	7, 14, 21, and 28	4.OA.B.4
5	Write down the first four multiples of 9.	9, 18, 27, and 36	4.OA.B.4
6	Write down the first four multiples of 11.	11, 22, 33, and 44	4.OA.B.4
7	Write down the first five multiples of 35.	35, 70, 105, 140, and 175	4.OA.B.4
8	Write down the first five multiples of 50.	50, 100, 150, 200, and 250	4.OA.B.4
9	Write down the first five multiples of 100.	100, 200, 300, 400 and 500	4.OA.B.4
10	Write down the first six multiples of 250.	250, 500, 750, 1000, 1250, and 1500	4.OA.B.4
11	Find the first even number that is a multiple of 3 and 7.	42	4.OA.B.4

## Multiples Worksheet | Grades 4 to 5 | Answers




Question number	Question	Answers	Standard
12	Find the smallest number over 200 that is a multiple of 7.	203	4.OA.B.4
13	From the list of numbers 5, 9, 12, 14, 20, 23, 30, 36, 45 (a) Write down the multiples of 7 (b) Write down the multiples of 5 (c) Write down the multiples of 12	a) 14 b) 5, 20, 30, and 45 c) 12 and 36	4.OA.B.4
14	A grocery store has 7878 boxes of cereal. They want to put the same number of boxes on each shelf. How many boxes should they put on each shelf?	6 boxes	4.OA.B.4
15	Place the following numbers into the Venn diagram: 8, 10, 12, 16, 20, 21, 25, 40, 50		4.OA.B.4

## Do you have a group of students who need a boost in math?

Each student could receive a personalized lesson every week from our specialist one-on-one math tutors.

- ✓ Differentiated instruction for each student
- ✓ Aligned to your state's standard
- ✓ Scaffolded learning to close gaps

## Speak to us

-  [thirdspacelearning.com/us/](https://thirdspacelearning.com/us/)
-  +1 929-298-4593
-  [hello@thirdspacelearning.com](mailto:hello@thirdspacelearning.com)



**THIRD SPACE**  
LEARNING