

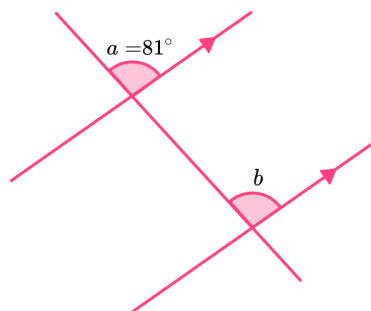
# Corresponding Angles - Worksheet

## Skill

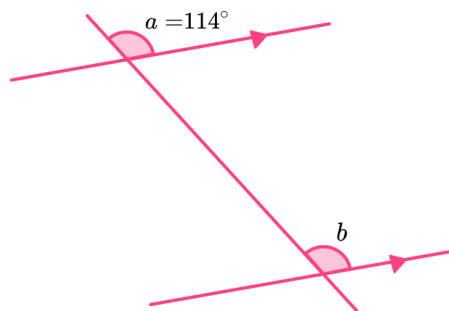
### Group A - Two angles that are corresponding

Find the missing angles:

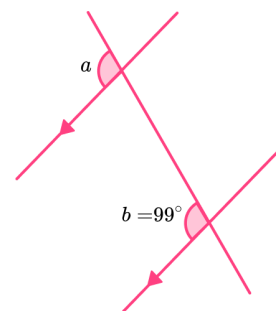
1)



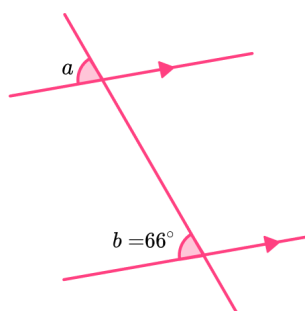
2)



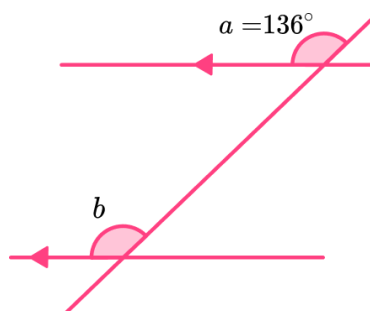
3)



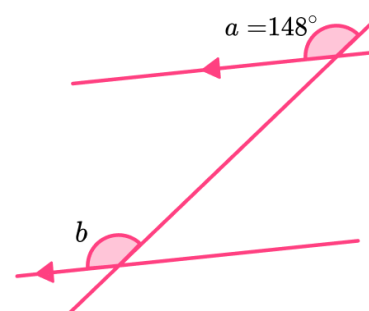
4)



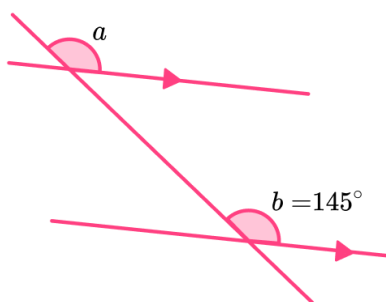
5)



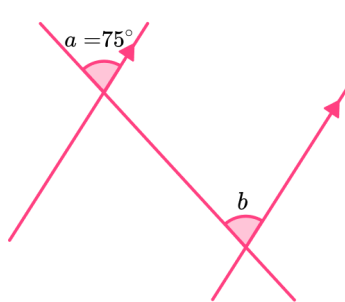
6)



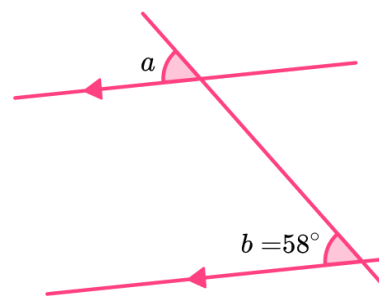
7)



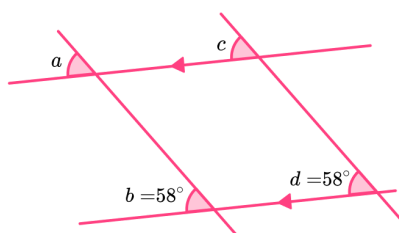
8)



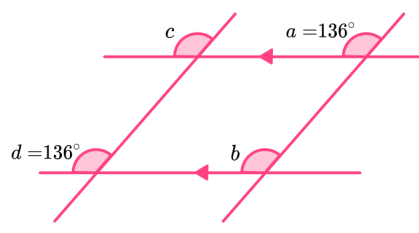
9)



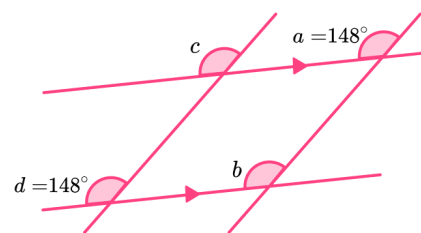
10)



11)



12)

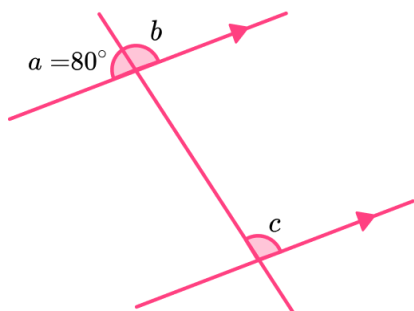


# Corresponding Angles - Worksheet

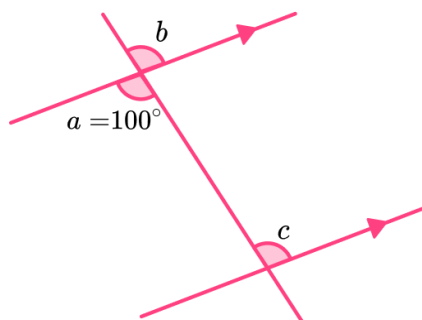
## Group B - Corresponding angles problems

Find the missing angles:

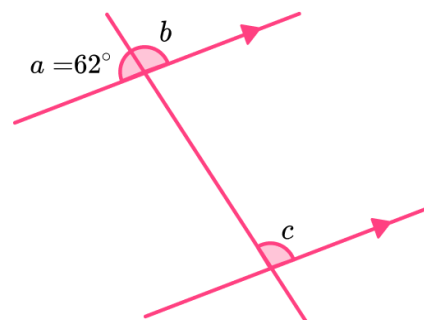
1)



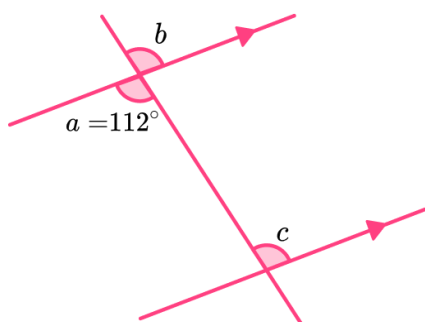
2)



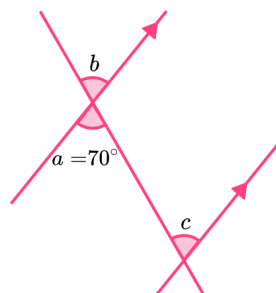
3)



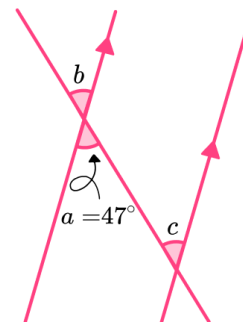
4)



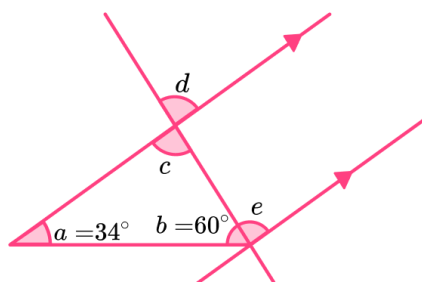
5)



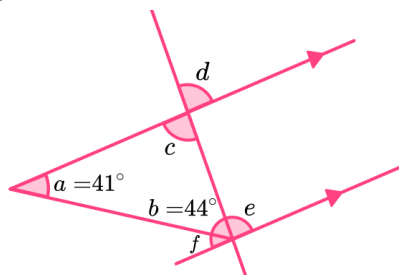
6)



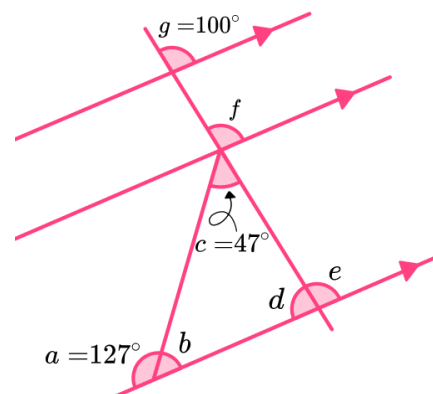
7)



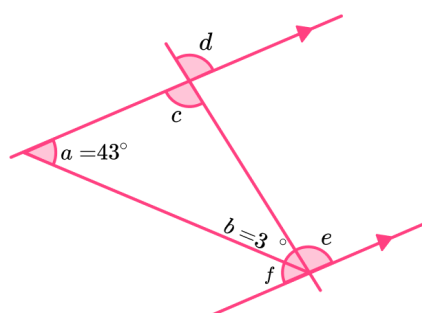
8)



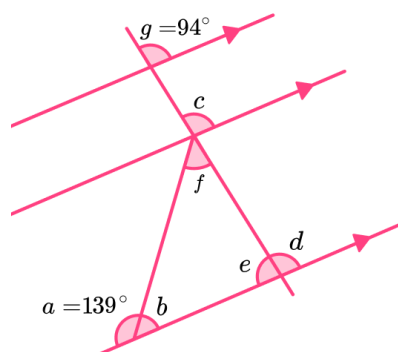
9)



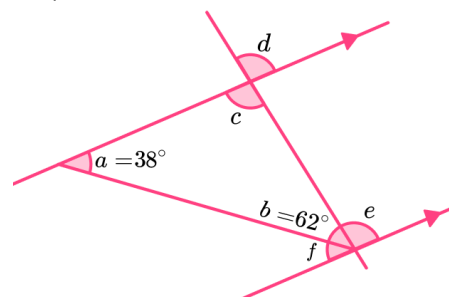
10)



11)



12)

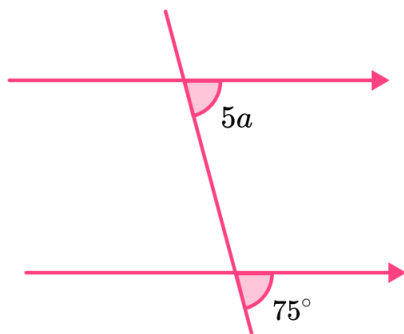


# Corresponding Angles - Worksheet

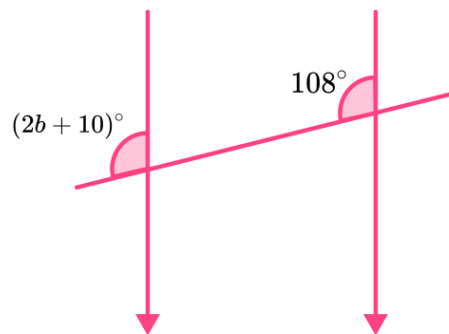
## Group C - Algebraic corresponding angles

Find the unknown variable in each question:

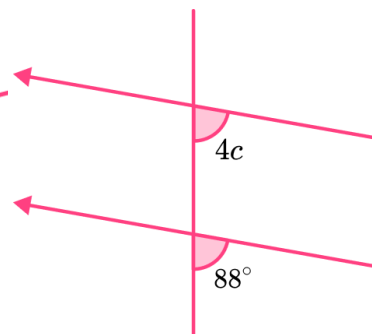
1)



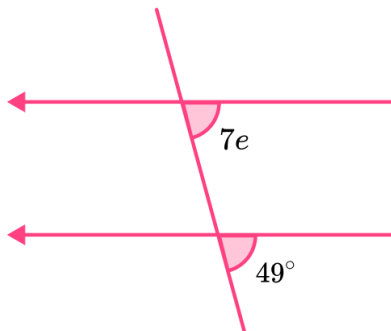
2)



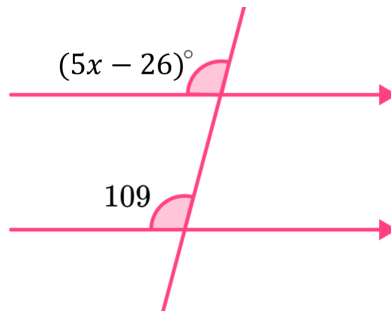
3)



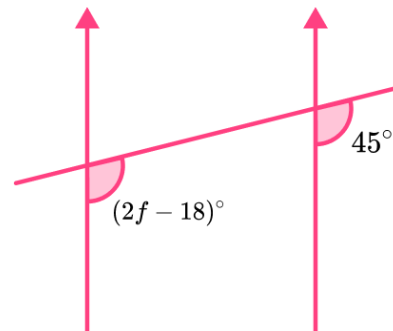
4)



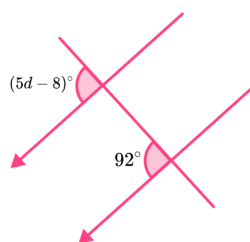
5)



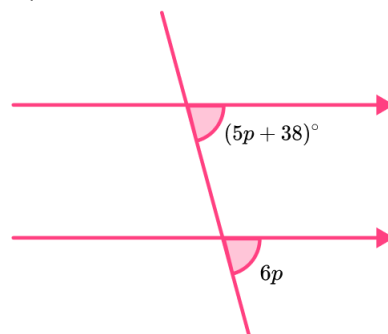
6)



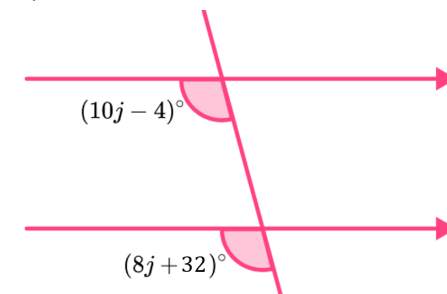
7)



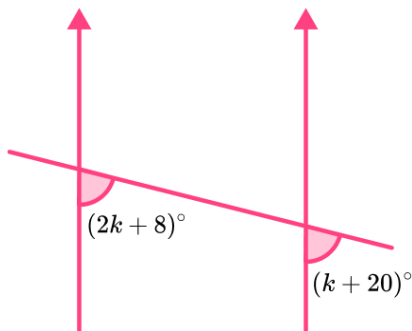
8)



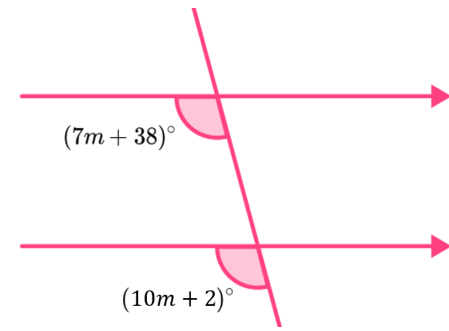
9)



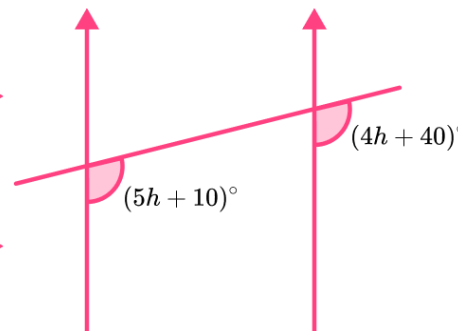
10)



11)



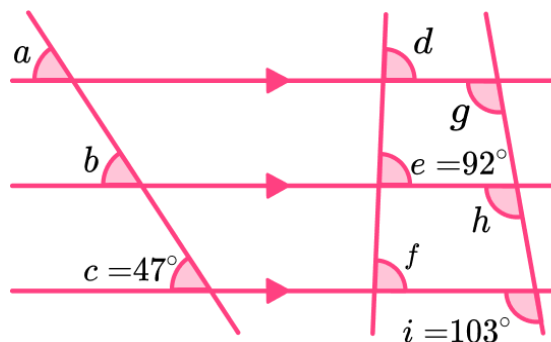
12)



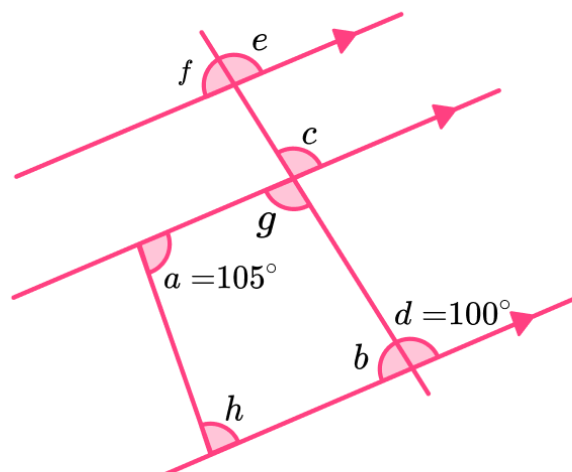
# Corresponding Angles - Worksheet

## Applied

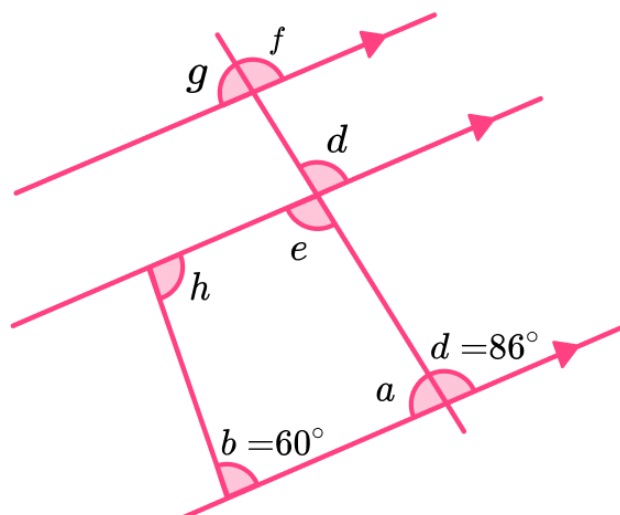
- 1) Find the missing angles.



- 2) Find the missing angles.

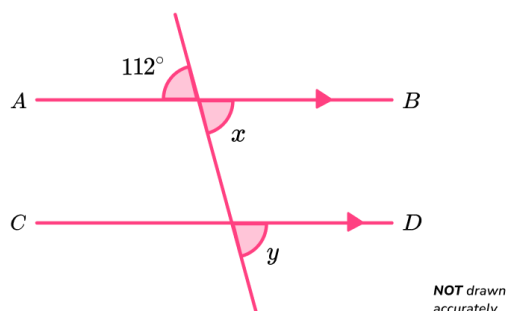


- 3) Find the missing angles.



## Corresponding Angles - Exam Questions

- 1) (a) In the diagram below,  $AB$  is parallel to line  $CD$



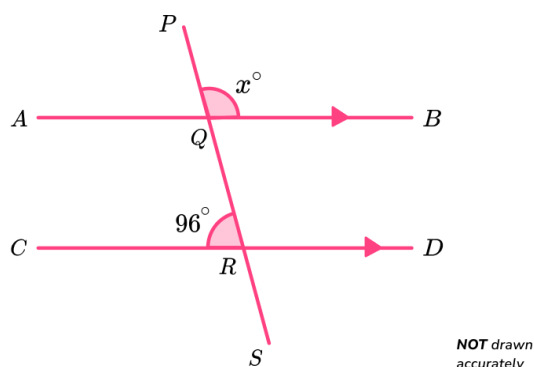
Find the value of  $x$ . Give a reason for your answer.

.....  
(2)

- (b) Find the value of  $y$ . Give a reason for your answer.

.....  
(2)  
(4 marks)

- 2) In the diagram below,  $AB$  is parallel to line  $CD$

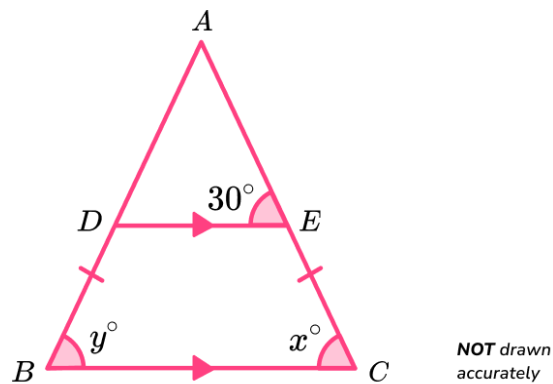


Find the value of  $x$ . Give reasons for your answer.

.....  
(4 marks)

## Corresponding Angles - Exam Questions

- 3) Shown below is an isosceles triangle.



Lines  $DE$  and  $BC$  are parallel, and  $AB = AC$ .

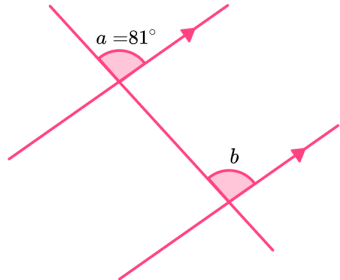
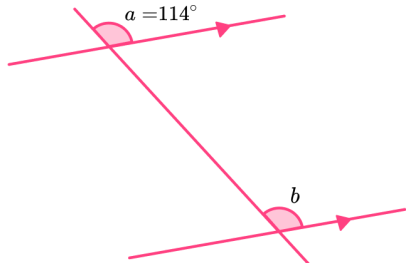
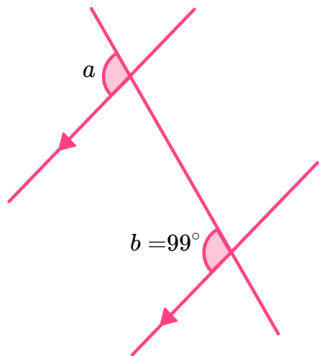
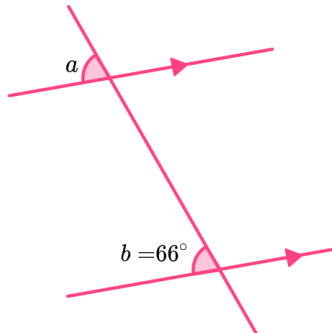
- (a) Find the value of  $x$ . Give a reason for your answer.

.....  
(2)

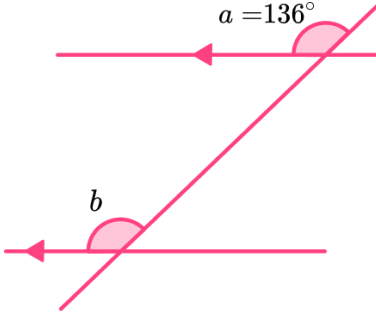
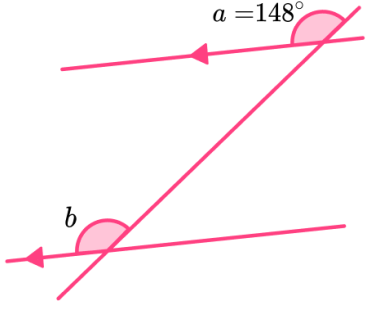
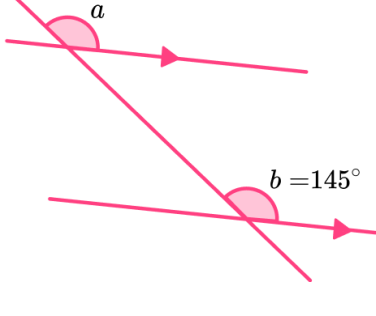
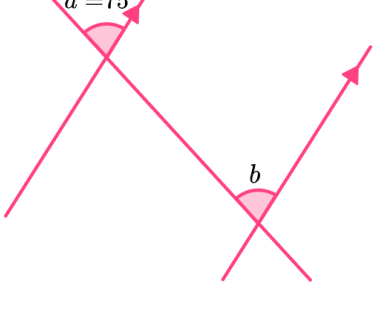
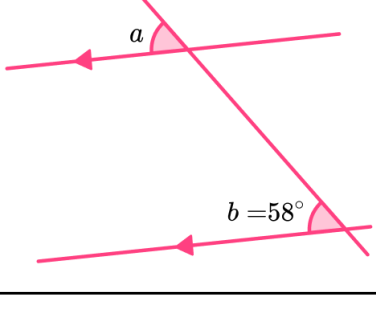
- (b) Find the value of  $y$ . Give a reason for your answer.

.....  
(2)  
(4 marks)

## Corresponding Angles - Answers

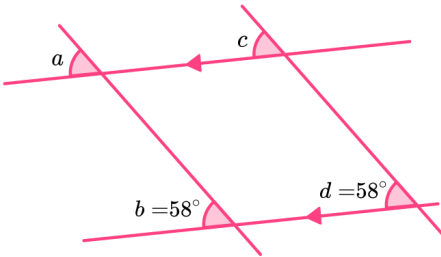
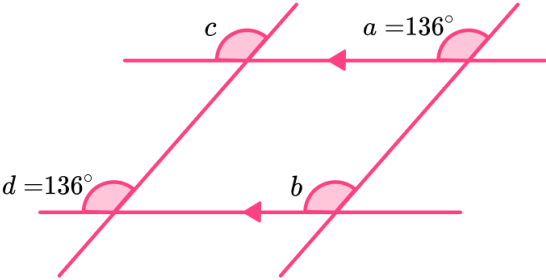
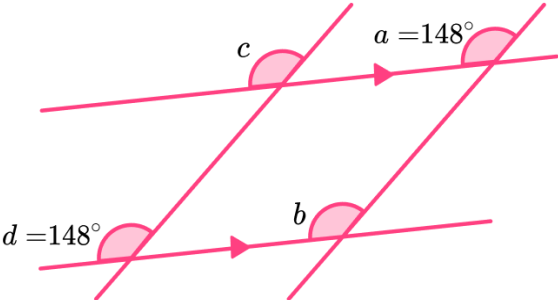
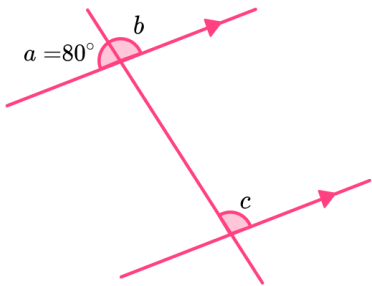
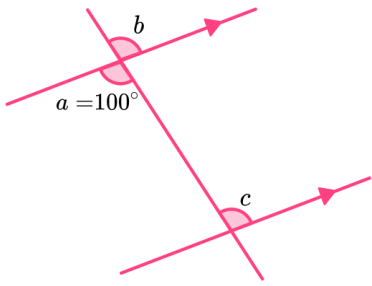
	Question	Answer
	Skill Questions	
Group A	<p>Find the missing angles:</p> <p>1) </p> <p>2) </p> <p>3) </p> <p>4) </p>	<p>1) <math>b = 81^\circ</math></p> <p>2) <math>b = 114^\circ</math></p> <p>3) <math>a = 99^\circ</math></p> <p>4) <math>a = 66^\circ</math></p>

## Corresponding Angles - Answers

Group A contd	<p>5) </p> <p>6) </p> <p>7) </p> <p>8) </p> <p>9) </p>	<p>5) <math>b = 136^\circ</math></p> <p>6) <math>b = 148^\circ</math></p> <p>7) <math>a = 145^\circ</math></p> <p>8) <math>b = 75^\circ</math></p> <p>9) <math>a = 58^\circ</math></p>
------------------	--	--



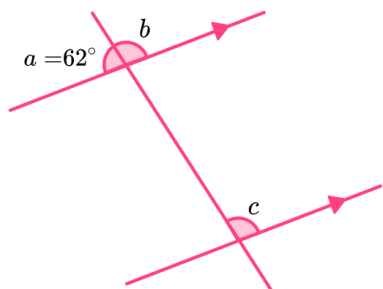
# Corresponding Angles - Answers

<p>Group A contd</p>	<p><b>10)</b> </p> <p><b>11)</b> </p> <p><b>12)</b> </p>	<p><b>10)</b> <math>a = 58^\circ, c = 58^\circ</math></p> <p><b>11)</b> <math>b = 136^\circ, c = 136^\circ</math></p> <p><b>12)</b> <math>b = 148^\circ, c = 148^\circ</math></p>
<p>Group B</p>	<p>Find the missing angles:</p> <p><b>1)</b> </p> <p><b>2)</b> </p>	<p><b>1)</b> <math>b = 100^\circ, c = 100^\circ</math></p> <p><b>2)</b> <math>b = 100^\circ, c = 100^\circ</math></p>

# Corresponding Angles - Answers

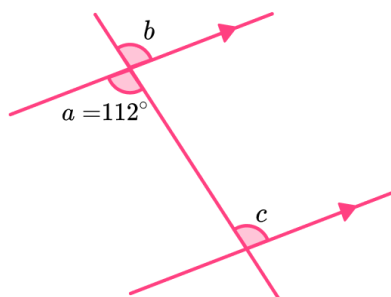
Group B  
contd

3)



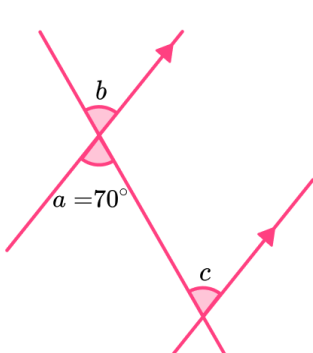
3)  $b = 118^\circ$ ,  $c = 118^\circ$

4)



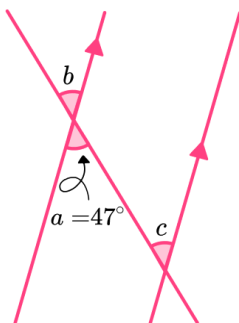
4)  $b = 112^\circ$ ,  $c = 112^\circ$

5)



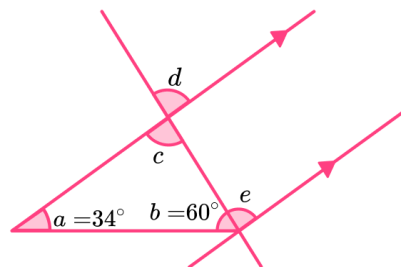
5)  $b = 70^\circ$ ,  $c = 70^\circ$

6)



6)  $b = 47^\circ$ ,  $c = 47^\circ$

7)

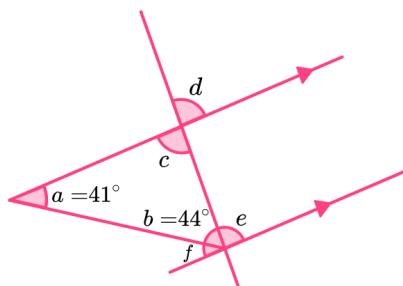


7)  $c = 86^\circ$ ,  $d = 86^\circ$ ,  
 $e = 86^\circ$

# Corresponding Angles - Answers

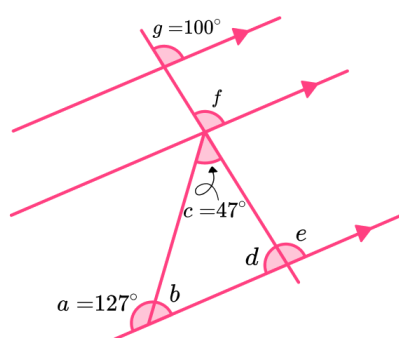
Group B  
contd

8)



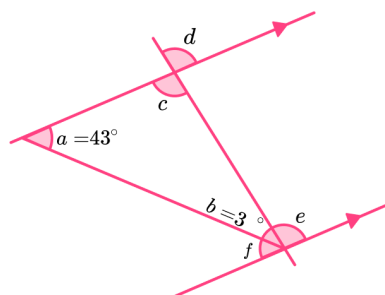
8)  $c = 95^\circ$ ,  $d = 95^\circ$ ,  
 $e = 95^\circ$ ,  $f = 41^\circ$

9)



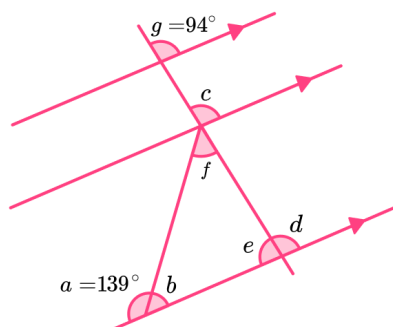
9)  $b = 53^\circ$ ,  $d = 80^\circ$ ,  
 $e = 100^\circ$ ,  $f = 100^\circ$

10)



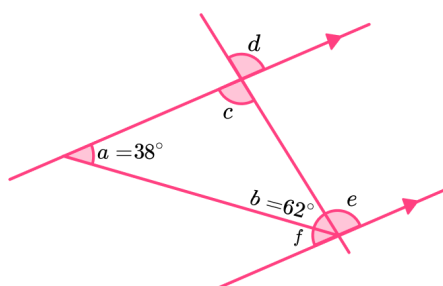
10)  $c = 134^\circ$ ,  $d = 134^\circ$ ,  
 $e = 134^\circ$ ,  $f = 43^\circ$

11)



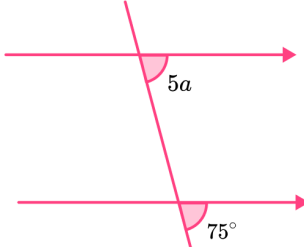
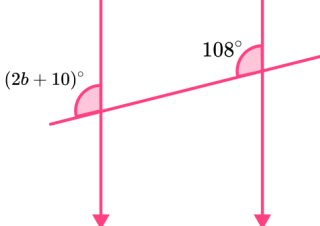
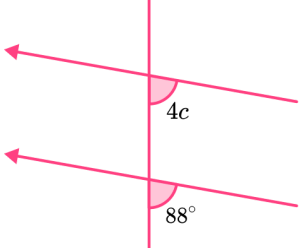
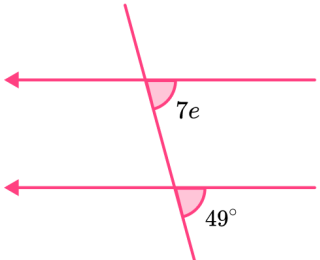
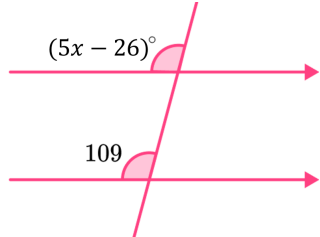
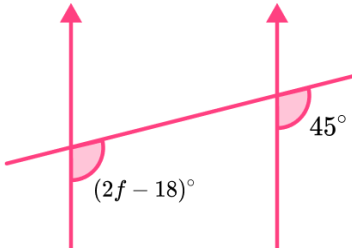
11)  $b = 41^\circ$ ,  $c = 94^\circ$ ,  
 $d = 94^\circ$ ,  $e = 86^\circ$ ,  
 $f = 53^\circ$

12)

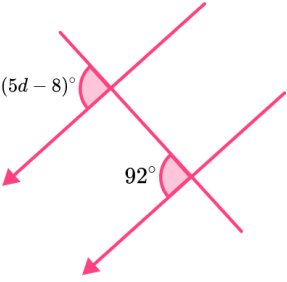
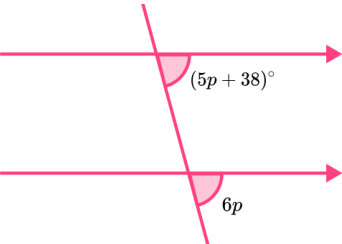
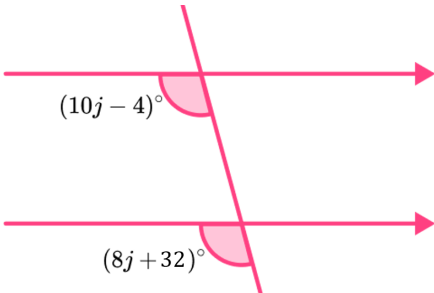
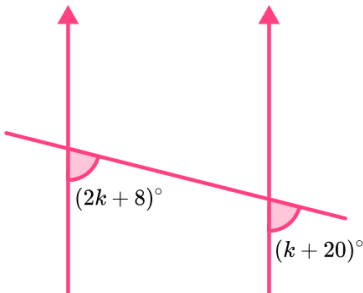
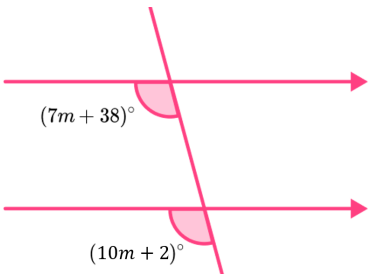
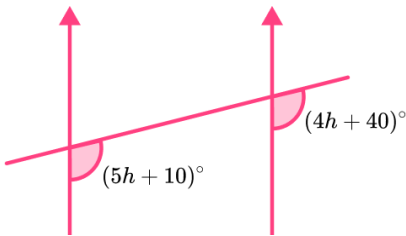


12)  $c = 80^\circ$ ,  $d = 80^\circ$ ,  
 $e = 80^\circ$ ,  $f = 38^\circ$

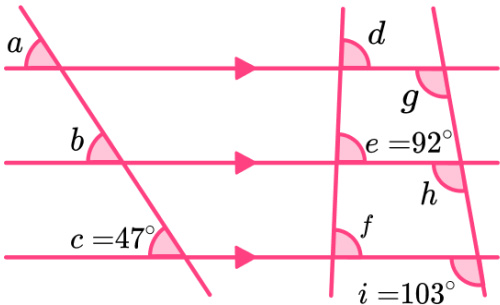
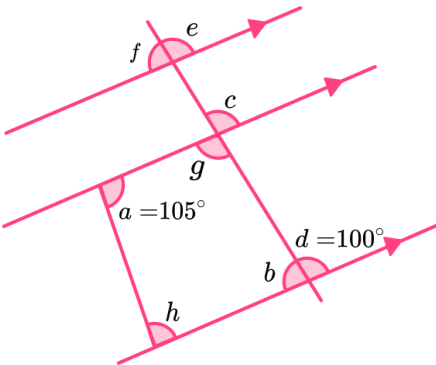
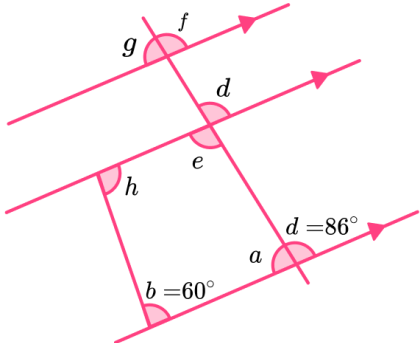
# Corresponding Angles - Answers

Group C	Find the unknown variable in each question:	
	<p>1)</p> 	<p>1) <math>a = 15</math></p>
	<p>2)</p> 	<p>2) <math>b = 49</math></p>
	<p>3)</p> 	<p>3) <math>c = 22</math></p>
	<p>4)</p> 	<p>4) <math>e = 7</math></p>
	<p>5)</p> 	<p>5) <math>x = 27</math></p>
	<p>6)</p> 	<p>6) <math>f = 31.5</math></p>

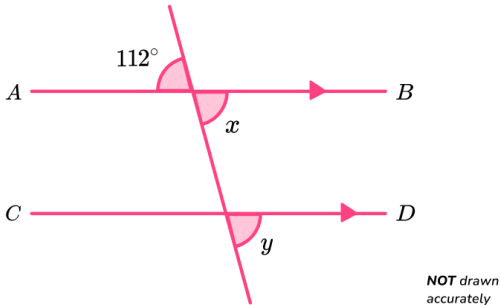
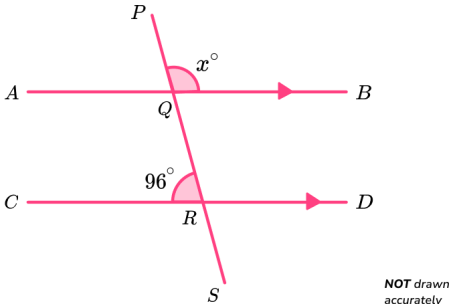
# Corresponding Angles - Answers

	<p><b>7)</b></p>  <p><b>8)</b></p>  <p><b>9)</b></p>  <p><b>10)</b></p>  <p><b>11)</b></p>  <p><b>12)</b></p> 	<p><b>7)</b> <math>d = 20</math></p> <p><b>8)</b> <math>p = 38</math></p> <p><b>9)</b> <math>j = 18</math></p> <p><b>10)</b> <math>k = 12</math></p> <p><b>11)</b> <math>m = 12</math></p> <p><b>12)</b> <math>h = 30</math></p>
--	---	--

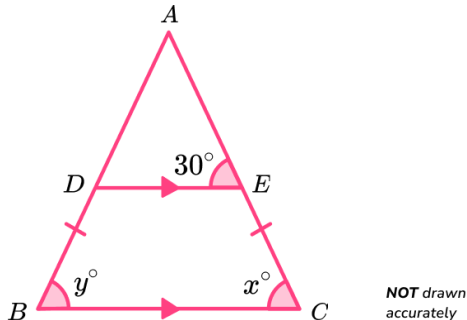
## Corresponding Angles - Answers

	Question	Answer
	Applied Questions	
1)	<p>Find the missing angles.</p> 	$a = 47^\circ$ $b = 47^\circ$ $d = 92^\circ$ $f = 92^\circ$ $g = 103^\circ$ $h = 103^\circ$
2)	<p>Find the missing angles.</p> 	$b = 80^\circ$ $c = 100^\circ$ $e = 100^\circ$ $g = 100^\circ$ $h = 75^\circ$
3)	<p>Find the missing angles.</p> 	$a = 94^\circ$ $d = 86^\circ$ $e = 86^\circ$ $f = 86^\circ$ $g = 94^\circ$ $h = 120^\circ$

# Corresponding Angles - Mark Scheme

	Question	Answer	
	Exam Questions		
1) (a)	<p>In the diagram below, <math>AB</math> is parallel to line <math>CD</math></p>  <p>Find the value of <math>x</math>. Give a reason for your answer.</p>	<p>(a) <math>x = 112^\circ</math> Vertically opposite angles are equal</p>	<p>(1) (1)</p>
(b)	<p>Find the value of <math>y</math>. Give a reason for your answer.</p>	<p>(b) <math>y = 112^\circ</math> Corresponding angles are equal</p>	<p>(1) (1)</p>
2)	<p>In the diagram below, <math>AB</math> is parallel to line <math>CD</math></p>  <p>Find the value of <math>x</math>. Give a reason for your answer.</p>	<p><b>Alternative Method 1</b> Angle BQR = <math>96^\circ</math> Alternate angles are equal <math>x = 84^\circ</math> Angles on a straight line sum to <math>180^\circ</math></p> <p><b>Alternative Method 2</b> Angle AQR = <math>84^\circ</math> Co-interior angles are equal <math>x = 84^\circ</math> Vertically opposite angles are equal</p> <p><b>Alternative Method 3</b> Angle AQP = <math>96^\circ</math> Corresponding angles are equal <math>x = 84^\circ</math> Angles on a straight line sum to <math>180^\circ</math></p>	<p>(1) (1) (1) (1)  (1) (1) (1) (1)  (1) (1) (1) (1)</p>

## Corresponding Angles - Mark Scheme

3)	<p>Shown below is an isosceles triangle.</p>  <p>Lines <math>DE</math> and <math>BC</math> are parallel. <math>AB = AC</math></p> <p><b>(a)</b> Find the value of <math>x</math>. Give a reason for your answer.</p>		
	<p><b>(b)</b> Find the value of <math>y</math>. Give a reason for your answer.</p>	<p><math>x = 30^\circ</math> Corresponding angles are equal</p> <p><math>y = 30^\circ</math> Base angles in an isosceles triangle are equal</p>	<p><b>(1)</b> <b>(1)</b></p> <p><b>(1)</b> <b>(1)</b></p>

***Do you have KS4 students who need additional support in maths?***

Our specialist tutors will help them develop the skills they need to succeed at GCSE in weekly one to one online revision lessons. Trusted by secondary schools across the UK.

Visit **thirdspacelearning.com** to find out more.