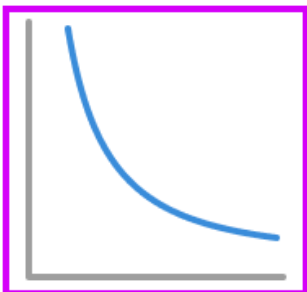


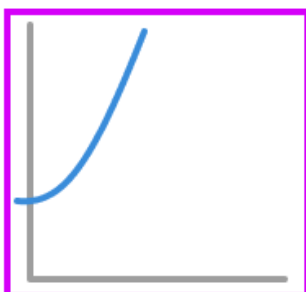
Directly proportional graphs / Inversely proportional - Worksheet**Skill****Group A - Direct proportion**

Identify the graphs representing direct proportion:

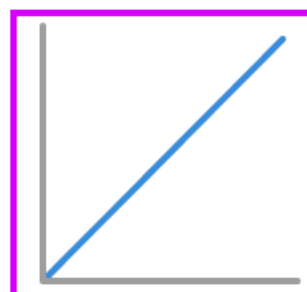
1)



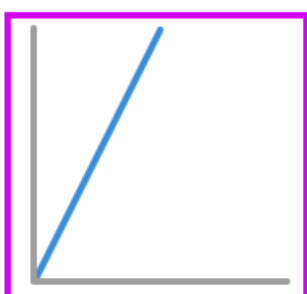
2)



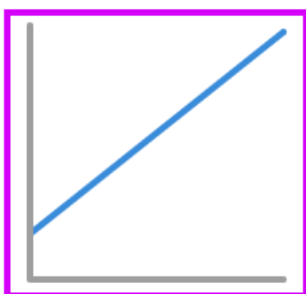
3)



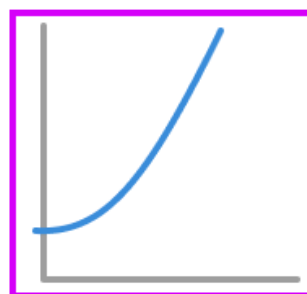
4)



5)

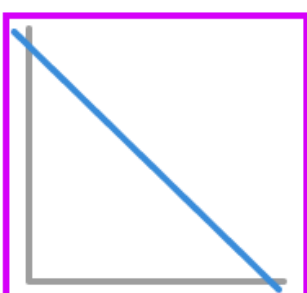


6)

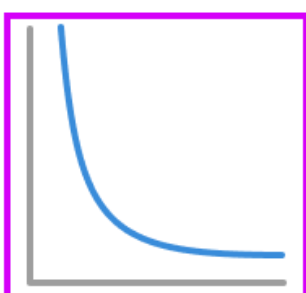
**Group B - Inverse proportion**

Identify the graphs representing inverse proportion:

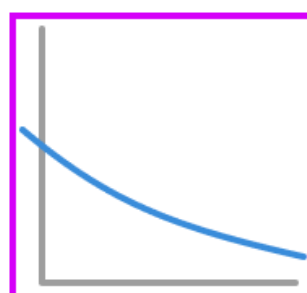
1)



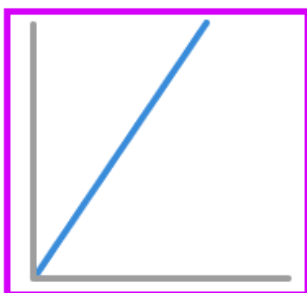
2)



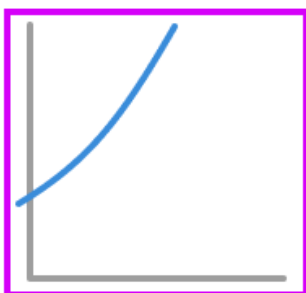
3)



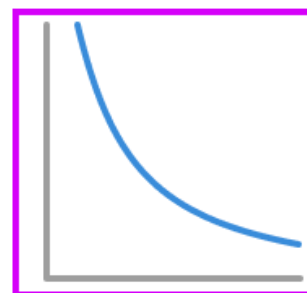
4)



5)



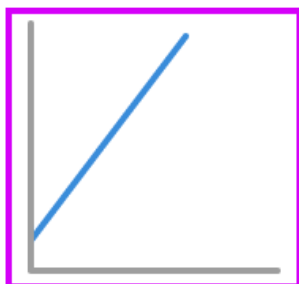
6)



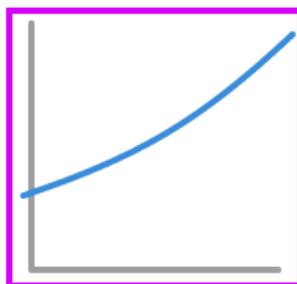
Directly proportional graphs / Inversely proportional - Worksheet**Group C - Mixed**

Identify the graphs representing direct proportion, inverse proportion or neither:


1)



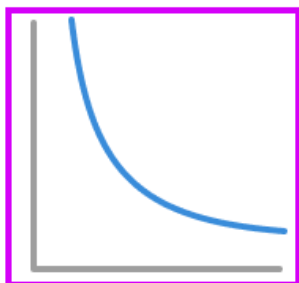
2)



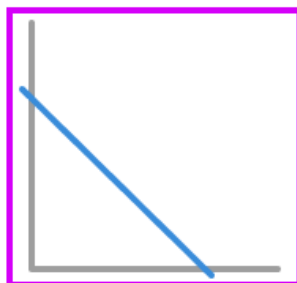
3)



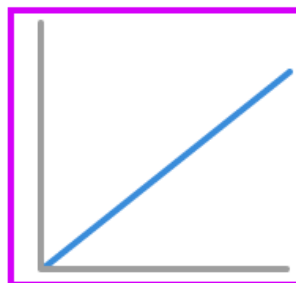
4)



5)

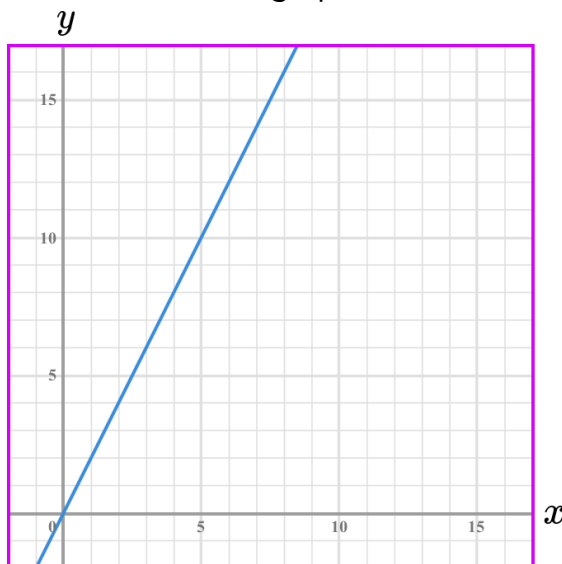


6)



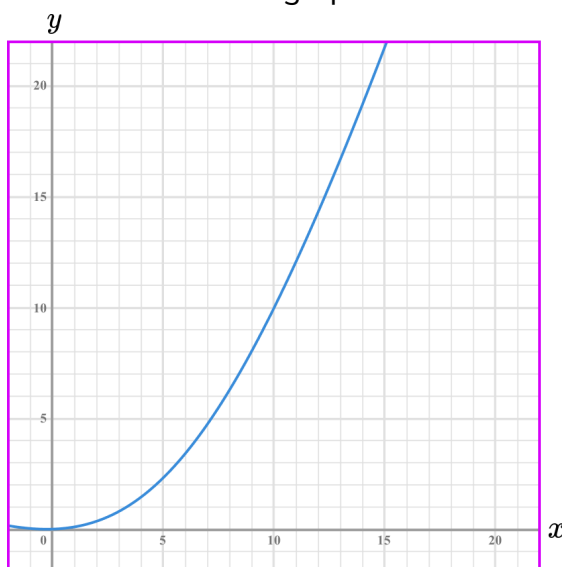
Directly proportional graphs / Inversely proportional - Worksheet**Applied**

- 1) y is directly proportional to x . Here is a graph of the relationship.



- (a) What is the value of y when $x = 3$?
- (b) What is the value of x when $y = 14$?

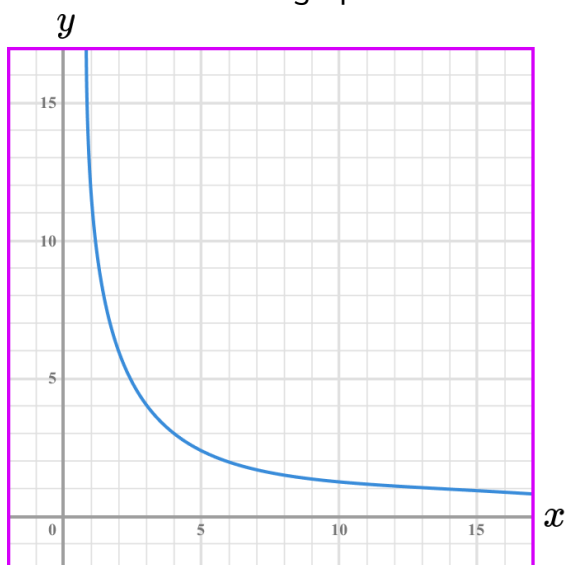
- 2) y is directly proportional to x^2 . Here is a graph of the relationship.



- (a) What is the value of y when $x = 13$.
Give your answer to the nearest integer.
- (b) What is the value of x when $y = 5$.
Give your answer to the nearest integer.

Directly proportional graphs / Inversely proportional - Worksheet

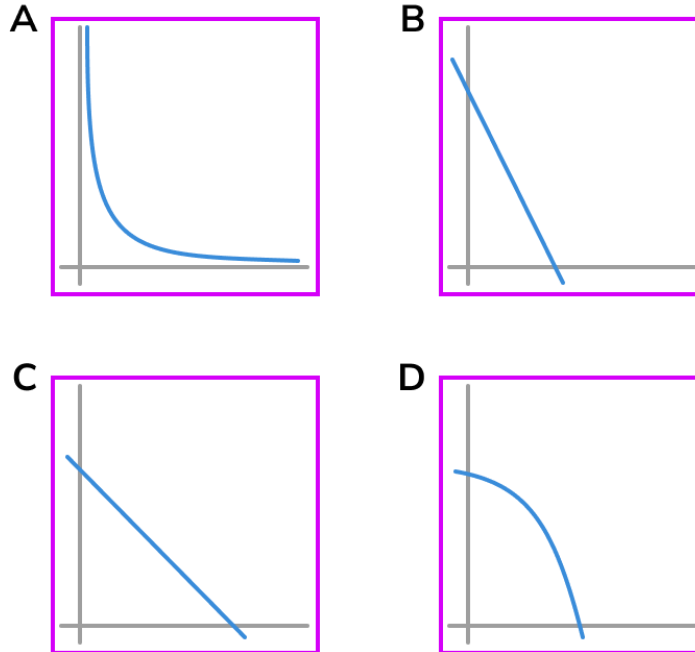
- 3)** y is inversely proportional to x . Here is a graph of the relationship.



- (a)** What is the value of y when $x = 4$?
- (b)** What is the value of x when $y = 12$?

Directly proportional graphs / Inversely proportional - Exam Questions

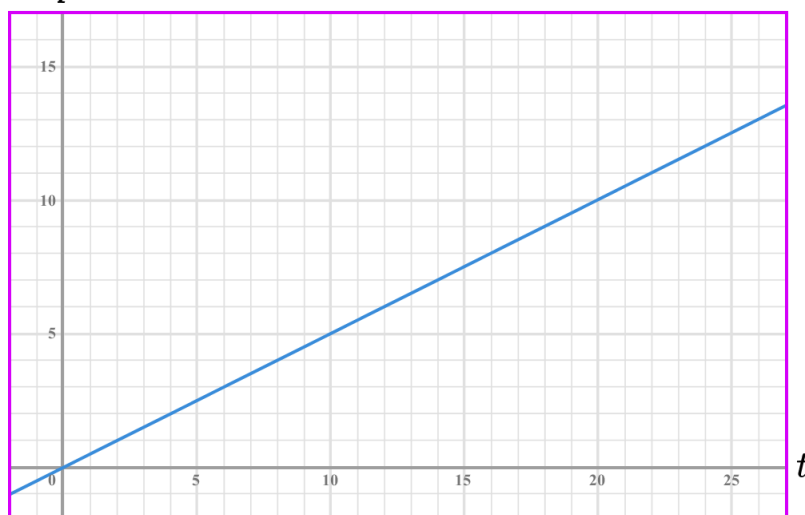
1) Here are 4 graphs.



Write down which graph shows inverse proportionality.

.....
(1 mark)

2) p is directly proportional to t

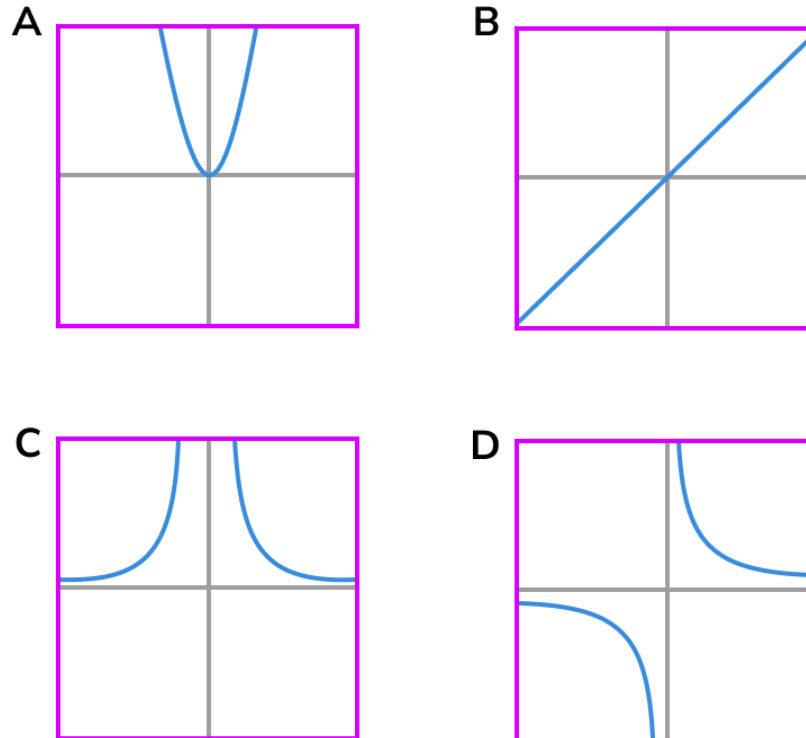


Use the graph to find the value of p when $t = 18$

.....
(2 marks)

Directly proportional graphs / Inversely proportional - Exam Questions

3) (a) Here are 4 graphs.

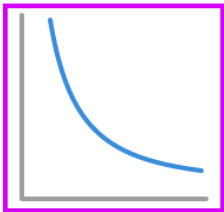
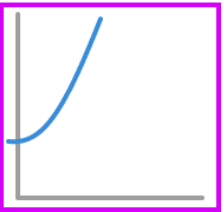
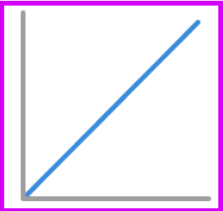
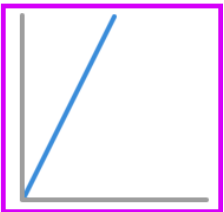
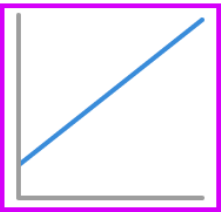
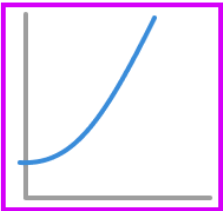


Match each statement below with one of the four graphs.

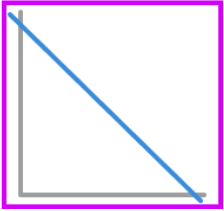
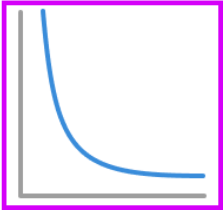
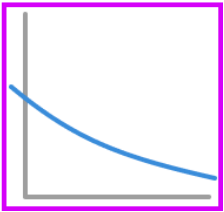

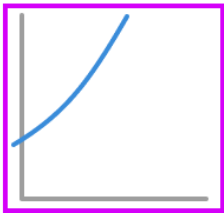
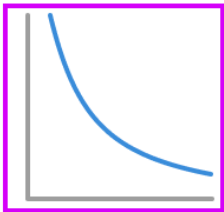
Proportionality relationship	Graph
y is directly proportional to x	
y is inversely proportional to x	
y is directly proportional to x^2	
y is inversely proportional to x^2	

(2)

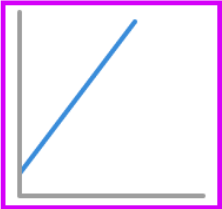
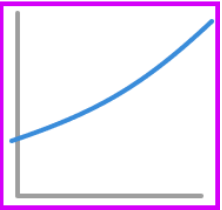
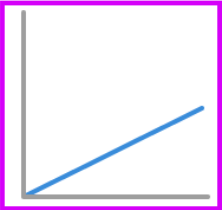
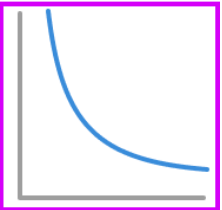
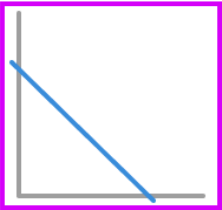
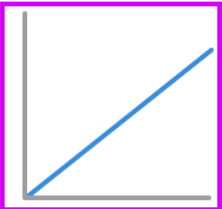
Directly proportional graphs / Inversely proportional - Answers

	Question	Answer
	Skill Questions	
Group A	<p>Identify the graphs representing direct proportion:</p> <p>1) </p> <p>2) </p> <p>3) </p> <p>4) </p> <p>5) </p> <p>6) </p>	<p>1) No</p> <p>2) No</p> <p>3) Yes</p> <p>4) Yes</p> <p>5) No</p> <p>6) No</p>

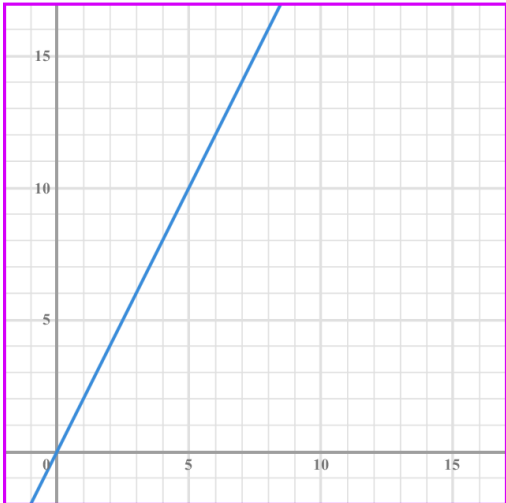
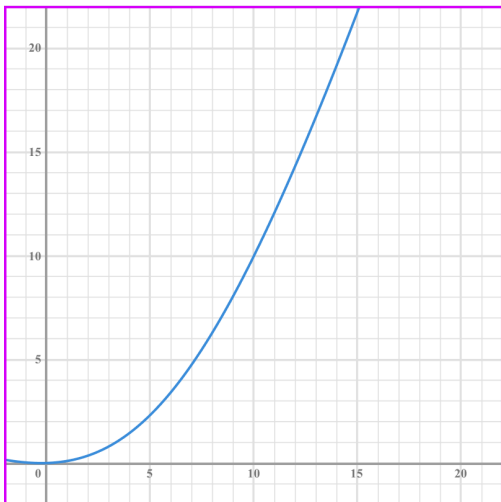
Directly proportional graphs / Inversely proportional - Answers

Group B	<p>Identify the graphs representing inverse proportion:</p> <p>1) </p> <p>2) </p> <p>3) </p> <p>4) </p> <p>5) </p> <p>6) </p>	<p>1) No</p> <p>2) Yes</p> <p>3) No</p> <p>4) No</p> <p>5) No</p> <p>6) Yes</p>
---------	--	---

Directly proportional graphs / Inversely proportional - Answers

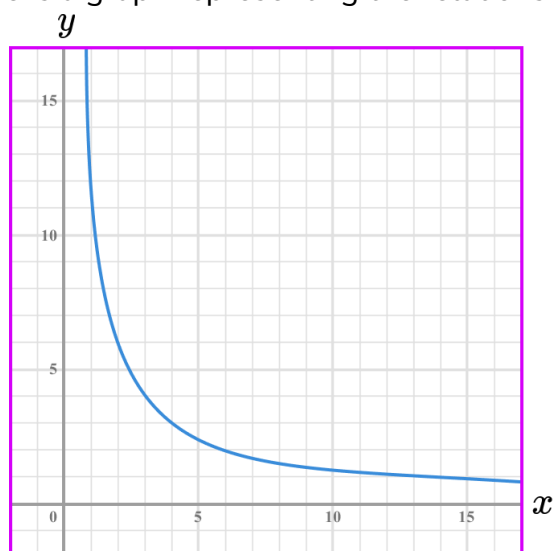
Group C	<p>Identify the graphs representing direct proportion, inverse proportion or neither:</p> <p>1) </p> <p>2) </p> <p>3) </p> <p>4) </p> <p>5) </p> <p>6) </p>	<p>1) Neither</p> <p>2) Neither</p> <p>3) Direct</p> <p>4) Inverse</p> <p>5) Neither</p> <p>6) Direct</p>
----------------	--	---

Directly proportional graphs / Inversely proportional - Answers

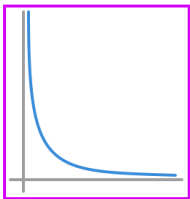

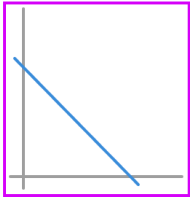

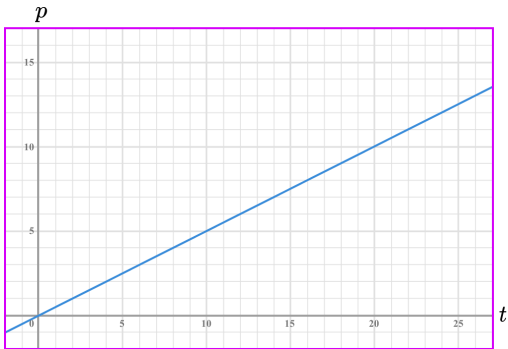
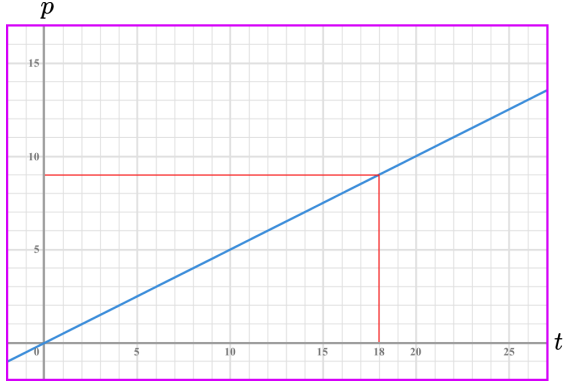
	Question	Answer
	Applied Questions	
1)	<p>y is directly proportional to x. Here is a graph of the relationship.</p>  <p>a) What is the value of y when $x = 3$? b) What is the value of x when $y = 14$?</p>	<p>a) $y = 6$ b) $x = 7$</p>
2)	<p>y is directly proportional to x^2. Here is a graph of the relationship.</p>  <p>a) What is the value of y when $x = 13$. Give your answer to the nearest integer. b) What is the value of x when $y = 5$. Give your answer to the nearest integer.</p>	<p>a) $y = 17$ (to the nearest integer) b) $x = 7$ (to the nearest integer)</p>

Directly proportional graphs / Inversely proportional - Answers**3)** y is inversely proportional to x .

Here is a graph representing the relationship.

**a)** What is the value of y when $x = 4$?**b)** What is the value of x when $y = 12$?**a)** $y = 3$ **b)** $x = 1$

Directly proportional graphs / Inversely proportional - Mark Scheme

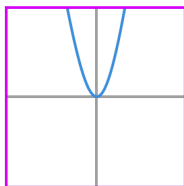
	Question	Answer
	Exam Questions	
1)	<p>Here are 4 graphs.</p> <div style="display: flex; justify-content: space-around;"> <div style="text-align: center;"> <p>A</p>  </div> <div style="text-align: center;"> <p>B</p>  </div> </div> <div style="display: flex; justify-content: space-around; margin-top: 20px;"> <div style="text-align: center;"> <p>C</p>  </div> <div style="text-align: center;"> <p>D</p>  </div> </div> <p>Write down which graph shows inverse proportionality.</p>	<p>(a) A</p> <p style="text-align: right;">(1)</p>
2)	<p>p is directly proportional to t</p>  <p>Use the graph to find the value of p when $t = 18$</p>	 <p>For using the graph $p = 9$</p> <p style="text-align: right;">(1) (1)</p>

Directly proportional graphs / Inversely proportional - Mark Scheme

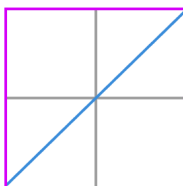
3)

Here are 4 graphs.

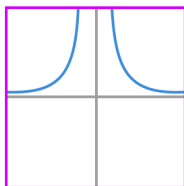
A




B



C



D



Match each statement below with one of the four graphs.

Proportionality relationship	Graph
y is directly proportional to x	
y is inversely proportional to x	
y is directly proportional to x^2	
y is inversely proportional to x^2	

Proportionality relationship	Graph
y is directly proportional to x	B
y is inversely proportional to x	D
y is directly proportional to x^2	A
y is inversely proportional to x^2	C

At least 2 correct

All 4 correct

(1)

(1)

Do you have KS4 students who need additional support in maths?

Our specialist tutors will help them develop the skills they need to succeed at GCSE in weekly one to one online revision lessons. Trusted by secondary schools across the UK.

Visit thirdspacelearning.com to find out more.