



**THIRD SPACE
LEARNING**

Area Check for Understanding

A 15 question retrieval quiz for
students in grades 4, 6 and 7.

Grades 4, 6 and 7

Questions

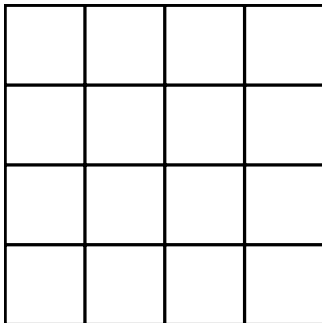
Name:

Class:

Date:

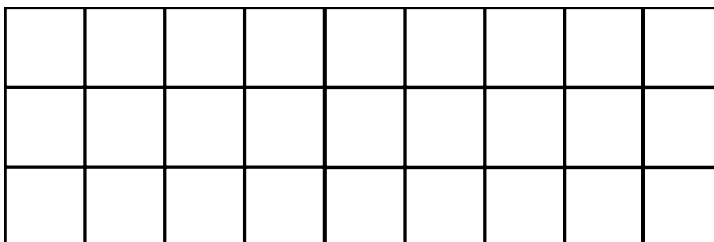
Score:

1 What is the area of the square?



Answer

2 What is the area of the rectangle?

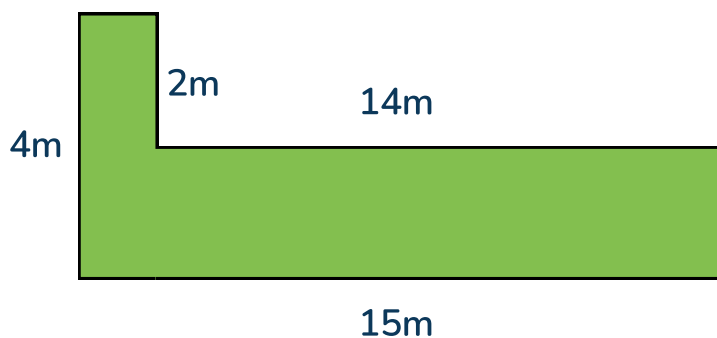


Answer

- 3 The area of the rectangle is 45 square centimeters. The height is 9 centimeters. What is the length?

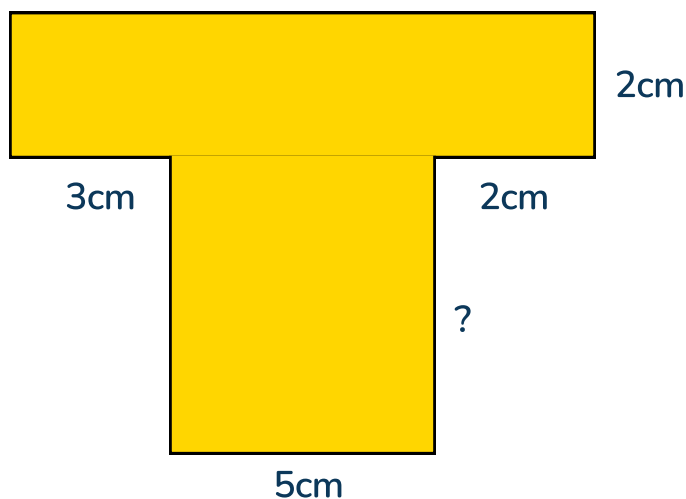
Answer

- 4 What is the area of the shape?



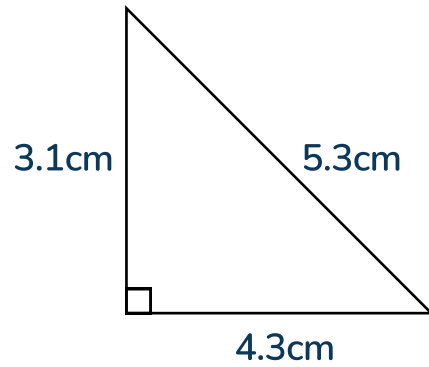
Answer

- 5 The area of the shape is 55 square centimeters. What is the missing length?



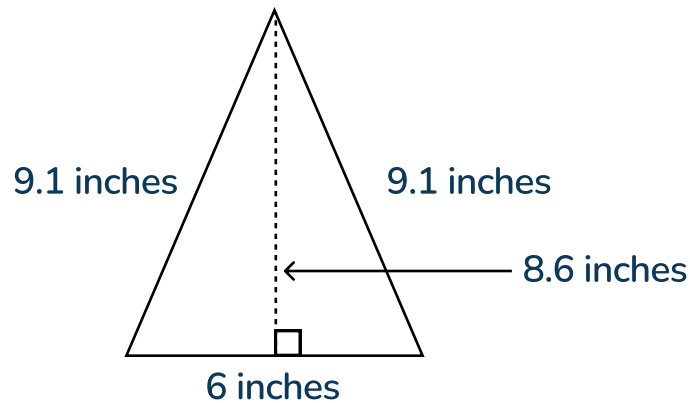
Answer

6 What is the area of the triangle?



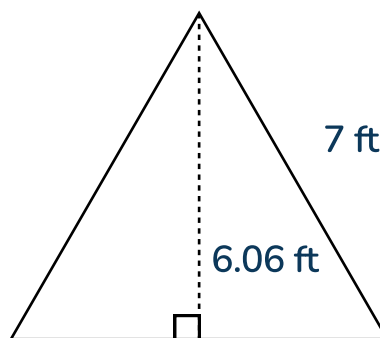
Answer

7 What is the area of the triangle?



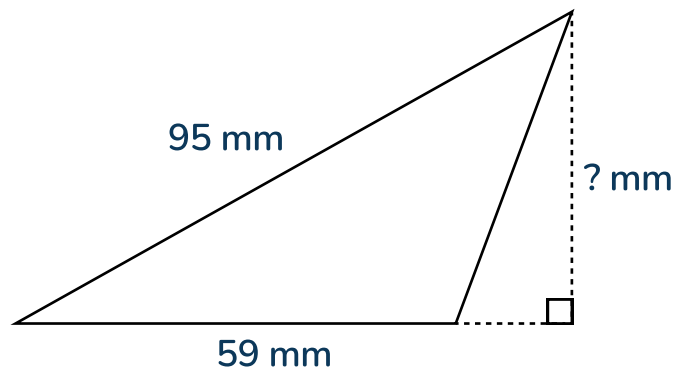
Answer

8 What is the area of the equilateral triangle?



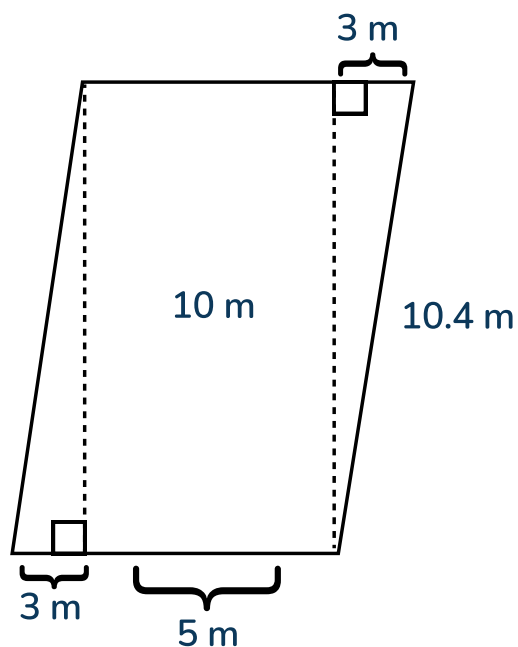
Answer

- 9 The area of the triangle is 1,652 square millimeters. What is the height of the triangle?



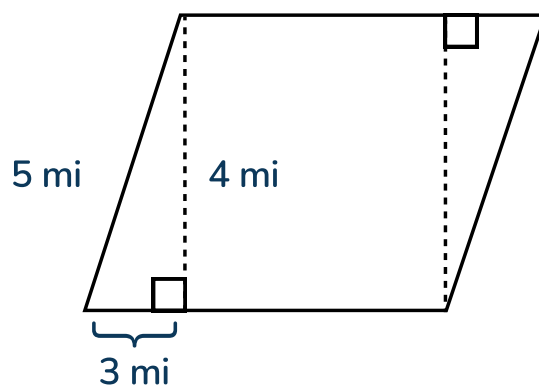
Answer

- 10 What is the area of the parallelogram?



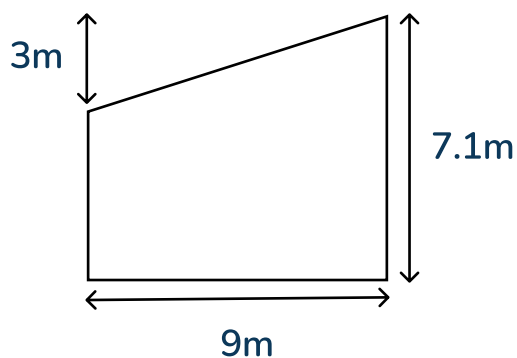
Answer

11 What is the area of the rhombus?




Answer

12 What is the area of the trapezoid?



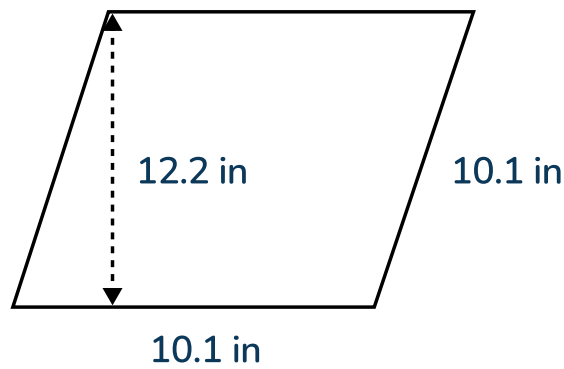
Answer

13 What is the area of the parallelogram?




Answer

14 What is the area of the rhombus?



Answer

15 What is the area of the trapezoid?



Answer

Answers

Question number	Question	Answers	Standard
1	What is the area of the square?	16 square units	3.MD.C.6
2	What is the area of the rectangle?	27 square units	3.MD.C.6
3	The area of the rectangle is 45 square centimeters. The height is 9 centimeters. What is the length?	5 centimeters	4.MD.A.3
4	What is the area of the shape?	32 square meters	4.MD.A.3
5	The area of the shape is 55 square centimeters. What is the missing length?	7 centimeters	4.MD.A.3
6	What is the area of the triangle?	6.665 square centimeters	6.G.A.1
7	What is the area of the triangle?	25.8 square inches	6.G.A.1
8	What is the area of the equilateral triangle?	21.21 square feet	6.G.A.1
9	The area of the triangle is 1,652 square millimeters. What is the height of the triangle?	56 millimeters	6.G.A.1
10	What is the area of the parallelogram?	80 square meters	6.G.A.1
11	What is the area of the rhombus?	20 square miles	6.G.A.1

Check for Understanding | 4th, 6th and 7th Grade | Area | Answers




Question number	Question	Answers	Standard
12	What is the area of the trapezoid?	50.4 square meters	6.G.A.1
13	What is the area of the parallelogram?	218.05 square centimeters	6.G.A.1
14	What is the area of the rhombus?	123.22 square inches	6.G.A.1
15	What is the area of the trapezoid?	134 square inches	6.G.A.1 7.G.B.6

Do you have a group of students who need a boost in math?

Each student could receive a personalized lesson every week from our specialist one-on-one math tutors.

- ✓ Differentiated instruction for each student
- ✓ Aligned to your state's standard
- ✓ Scaffolded learning to close gaps

Speak to us

-  thirdspacelearning.com/us/
-  +1 929-298-4593
-  hello@thirdspacelearning.com



THIRD SPACE
LEARNING